

(Chapter 10)(Haloalkanes and Haloarenes)

XII

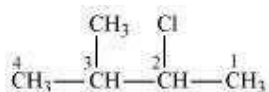
Question 10.1:

Name the following halides according to IUPAC system and classify them as alkyl, allyl, benzyl (primary, secondary, tertiary), vinyl or aryl halides:

- (i) $(\text{CH}_3)_2\text{CHCH}(\text{Cl})\text{CH}_3$
- (ii) $\text{CH}_3\text{CH}_2\text{CH}(\text{CH}_3)\text{CH}(\text{C}_2\text{H}_5)\text{Cl}$
- (iii) $\text{CH}_3\text{CH}_2\text{C}(\text{CH}_3)_2\text{CH}_2\text{I}$
- (iv) $(\text{CH}_3)_3\text{CCH}_2\text{CH}(\text{Br})\text{C}_6\text{H}_5$
- (v) $\text{CH}_3\text{CH}(\text{CH}_3)\text{CH}(\text{Br})\text{CH}_3$
- (vi) $\text{CH}_3\text{C}(\text{C}_2\text{H}_5)_2\text{CH}_2\text{Br}$
- (vii) $\text{CH}_3\text{C}(\text{Cl})(\text{C}_2\text{H}_5)\text{CH}_2\text{CH}_3$
- (viii) $\text{CH}_3\text{CH}=\text{C}(\text{Cl})\text{CH}_2\text{CH}(\text{CH}_3)_2$
- (ix) $\text{CH}_3\text{CH}=\text{CHC}(\text{Br})(\text{CH}_3)_2$
- (x) $p\text{-ClC}_6\text{H}_4\text{CH}_2\text{CH}(\text{CH}_3)_2$
- (xi) $m\text{-ClCH}_2\text{C}_6\text{H}_4\text{CH}_2\text{C}(\text{CH}_3)_3$
- (xii) $o\text{-Br-C}_6\text{H}_4\text{CH}(\text{CH}_3)\text{CH}_2\text{CH}_3$

Answer

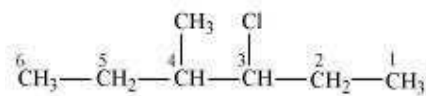
(i)



2-Chloro-3-methylbutane

(Secondary alkyl halide)

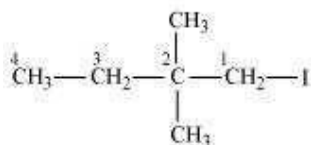
(ii)



3-Chloro-4-methylhexane

(Secondary alkyl halide)

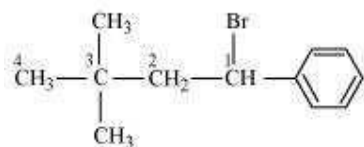
(iii)



1-Iodo-2, 2 -dimethylbutane

(Primary alkyl halide)

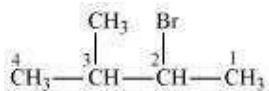
(iv)



1-Bromo-3, 3-dimethyl-1-phenylbutane

(Secondary benzyl halide)

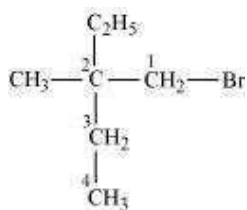
(v)



2-Bromo-3-methylbutane

(Secondary alkyl halide)

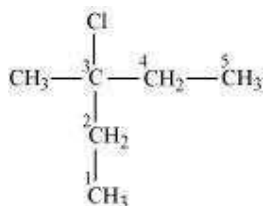
(vi)



1-Bromo-2-ethyl-2-methylbutane

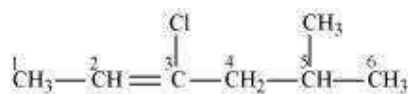
(Primary alkyl halide)

(vii)



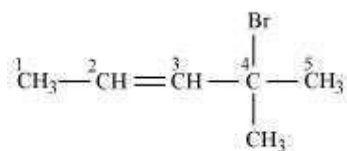
3-Chloro-3-methylpentane
(Tertiary alkyl halide)

(viii)



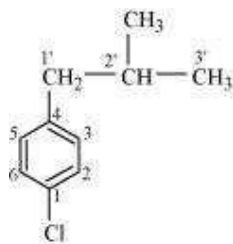
3-Chloro-5-methylhex-2-ene
(Vinyl halide)

(ix)



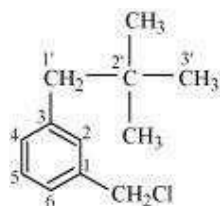
4-Bromo-4-methylpent-2-ene
(Allyl halide)

(x)



1-Chloro-4-(2-methylpropyl) benzene
(Aryl halide)

(xi)



1-Chloromethyl-3-(2, 2-dimethylpropyl) benzene

(Primary benzyl halide)

(xii)

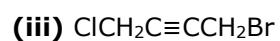
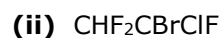
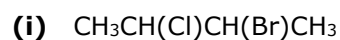


1-Bromo-2-(1-methylpropyl) benzene

(Aryl halide)

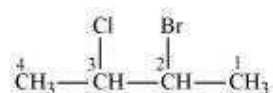
Question 10.2:

Give the IUPAC names of the following compounds:



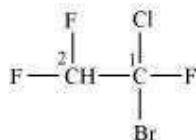
Answer

(i)



2-Bromo-3-chlorobutane

(ii)



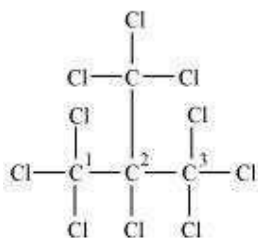
1-Bromo-1-chloro-1, 2, 2-trifluoroethane

(iii)



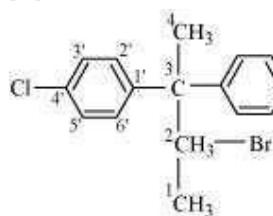
1-Bromo-4-chlorobut-2-yne

(iv)



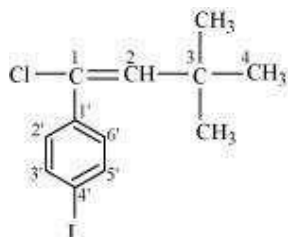
2-(Trichloromethyl)-1,1,1,2,3,3,3-heptachloropropane

(v)



2-Bromo-3, 3-bis(4-chlorophenyl) butane

(vi)



1-chloro-1-(4-iodophenyl)-3, 3-dimethylbut-1-ene

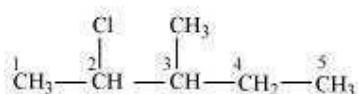
Question 10.3:

Write the structures of the following organic halogen compounds.

- (i) 2-Chloro-3-methylpentane
- (ii) *p*-Bromochlorobenzene
- (iii) 1-Chloro-4-ethylcyclohexane
- (iv) 2-(2-Chlorophenyl)-1-iodooctane
- (v) Perfluorobenzene
- (vi) 4-tert-Butyl-3-iodoheptane
- (vii) 1-Bromo-4-sec-butyl-2-methylbenzene
- (viii) 1,4-Dibromobut-2-ene

Answer

(i)



2-Chloro-3-methylpentane

(ii)



p-Bromochlorobenzene

(iii)



1-Chloro-4-ethylcyclohexane

(i) CH_2Cl_2

(ii) CHCl_3

(iii) CCl_4

Answer

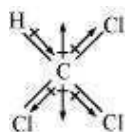
(i)



Dichloromethane (CH_2Cl_2)

$\mu = 1.60\text{D}$

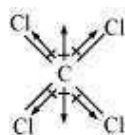
(ii)



Chloroform (CHCl_3)

$\mu = 1.08\text{D}$

(iii)



Carbon tetrachloride (CCl_4)

$\mu = 0\text{D}$

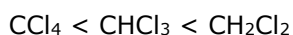
CCl_4 is a symmetrical molecule. Therefore, the dipole moments of all four C–Cl bonds cancel each other. Hence, its resultant dipole moment is zero.

As shown in the above figure, in CHCl_3 , the resultant of dipole moments of two C–Cl bonds is opposed by the resultant of dipole moments of one C–H bond and one C–Cl bond. Since the resultant of one C–H bond and one C–Cl bond dipole moments is smaller than two C–Cl bonds, the opposition is to a small extent. As a result, CHCl_3 has a small dipole moment of 1.08 D.

On the other hand, in case of CH_2Cl_2 , the resultant of the dipole moments of two C–Cl bonds is strengthened by the resultant of the dipole moments of two C–H bonds. As a

result, CH_2Cl_2 has a higher dipole moment of 1.60 D than CHCl_3 i.e., CH_2Cl_2 has the highest dipole moment.

Hence, the given compounds can be arranged in the increasing order of their dipole moments as:



Question 10.5:

A hydrocarbon C_5H_{10} does not react with chlorine in dark but gives a single monochloro compound $\text{C}_5\text{H}_9\text{Cl}$ in bright sunlight. Identify the hydrocarbon.

Answer

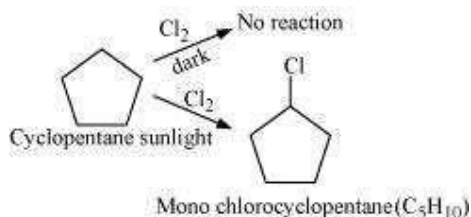
A hydrocarbon with the molecular formula, C_5H_{10} belongs to the group with a general molecular formula C_nH_{2n} . Therefore, it may either be an alkene or a cycloalkane. Since hydrocarbon does not react with chlorine in the dark, it cannot be an alkene. Thus, it should be a cycloalkane.

Further, the hydrocarbon gives a single monochloro compound, $\text{C}_5\text{H}_9\text{Cl}$ by reacting with chlorine in bright sunlight. Since a single monochloro compound is formed, the hydrocarbon must contain H-atoms that are all equivalent. Also, as all H-atoms of a cycloalkane are equivalent, the hydrocarbon must be a cycloalkane. Hence, the said compound is cyclopentane.



Cyclopentane (C_5H_{10})

The reactions involved in the question are:



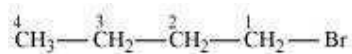
Question 10.6:

Write the isomers of the compound having formula $\text{C}_4\text{H}_9\text{Br}$.

Answer

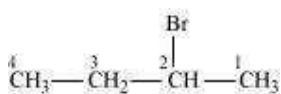
There are four isomers of the compound having the formula C_4H_9Br . These isomers are given below.

(a)



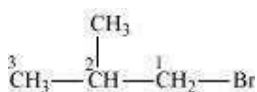
1-Bromobutane

(b)



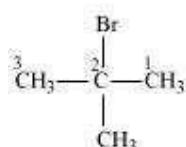
2-Bromobutane

(c)



1-Bromo-2-methylpropane

(d)



2-Bromo-2-methylpropane

Question 10.7:

Write the equations for the preparation of 1-iodobutane from

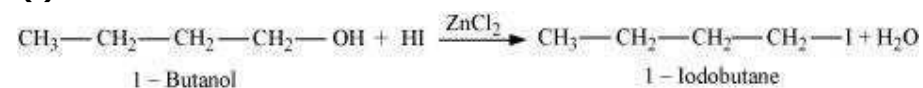
(i) 1-butanol

(ii) 1-chlorobutane

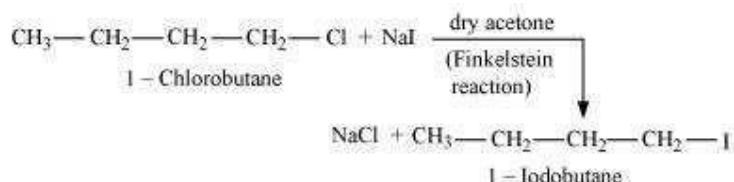
(iii) but-1-ene.

Answer

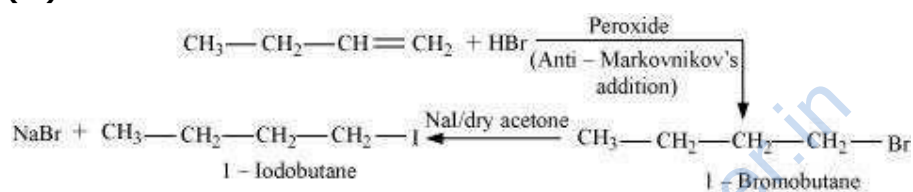
(i)



(ii)



(iii)



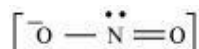
Question 10.8:

What are ambident nucleophiles? Explain with an example.

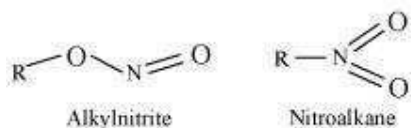
Answer

Ambident nucleophiles are nucleophiles having two nucleophilic sites. Thus, ambident nucleophiles have two sites through which they can attack.

For example, nitrite ion is an ambident nucleophile.



Nitrite ion can attack through oxygen resulting in the formation of alkyl nitrites. Also, it can attack through nitrogen resulting in the formation of nitroalkanes.



Question 10.9:

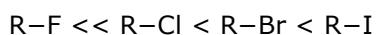
Which compound in each of the following pairs will react faster in $\text{S}_{\text{N}}2$ reaction with OH^- ?

(i) CH_3Br or CH_3I

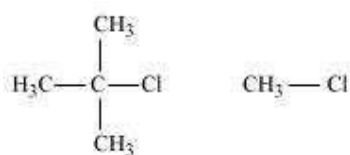
(ii) $(\text{CH}_3)_3\text{CCl}$ or CH_3Cl

Answer

(i) In the S_N2 mechanism, the reactivity of halides for the same alkyl group increases in the order. This happens because as the size increases, the halide ion becomes a better leaving group.



Therefore, CH_3I will react faster than CH_3Br in S_N2 reactions with OH^- . (ii)



The S_N2 mechanism involves the attack of the nucleophile at the atom bearing the leaving group. But, in case of $(CH_3)_3CCl$, the attack of the nucleophile at the carbon atom is hindered because of the presence of bulky substituents on that carbon atom bearing the leaving group. On the other hand, there are no bulky substituents on the carbon atom bearing the leaving group in CH_3Cl . Hence, CH_3Cl reacts faster than $(CH_3)_3CCl$ in S_N2 reaction with OH^- .

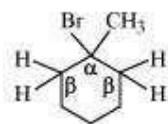
Question 10.10:

Predict all the alkenes that would be formed by dehydrohalogenation of the following halides with sodium ethoxide in ethanol and identify the major alkene:

- (i) 1-Bromo-1-methylcyclohexane
- (ii) 2-Chloro-2-methylbutane
- (iii) 2,2,3-Trimethyl-3-bromopentane.

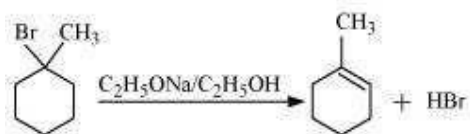
Answer

(i)

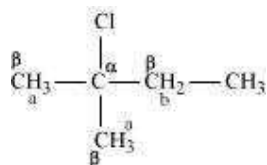


1-bromo-1-methylcyclohexane

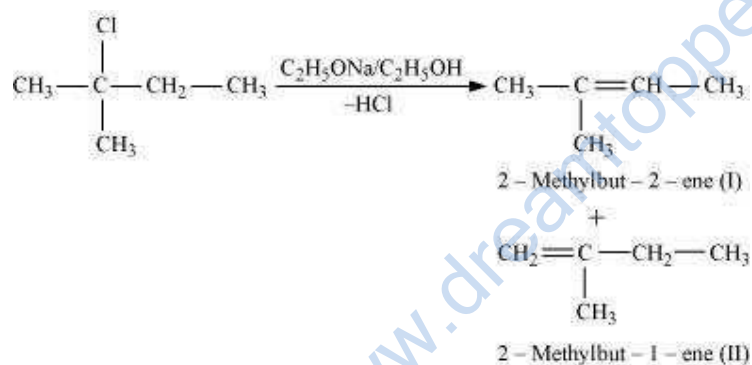
In the given compound, all β -hydrogen atoms are equivalent. Thus, dehydrohalogenation of this compound gives only one alkene.



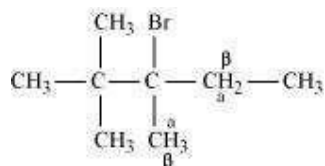
(ii)



In the given compound, there are two different sets of equivalent β -hydrogen atoms labelled as *a* and *b*. Thus, dehydrohalogenation of the compound yields two alkenes.

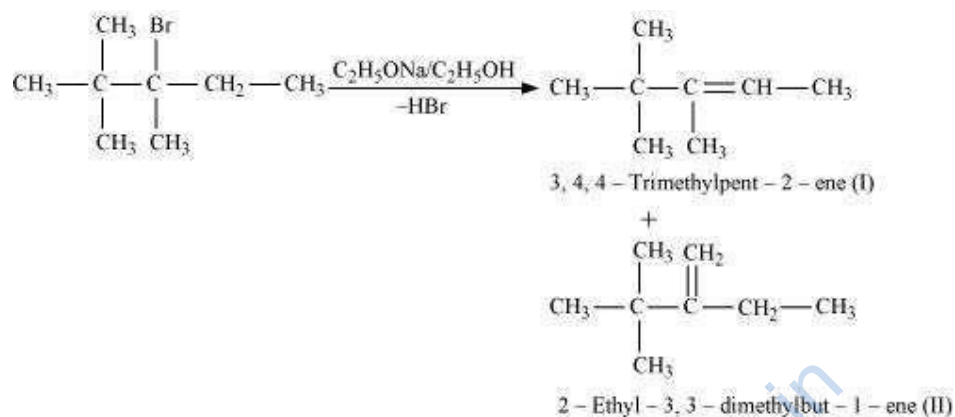


Saytzeff's rule implies that in dehydrohalogenation reactions, the alkene having a greater number of alkyl groups attached to a doubly bonded carbon atoms is preferably produced. Therefore, alkene (I) i.e., 2-methylbut-2-ene is the major product in this reaction. (iii)



2,2,3-Trimethyl-3-bromopentane

In the given compound, there are two different sets of equivalent β -hydrogen atoms labelled as *a* and *b*. Thus, dehydrohalogenation of the compound yields two alkenes.



According to Saytzeff's rule, in dehydrohalogenation reactions, the alkene having a greater number of alkyl groups attached to the doubly bonded carbon atom is preferably formed. Hence, alkene (I) i.e., 3,4,4-trimethylpent-2-ene is the major product in this reaction.

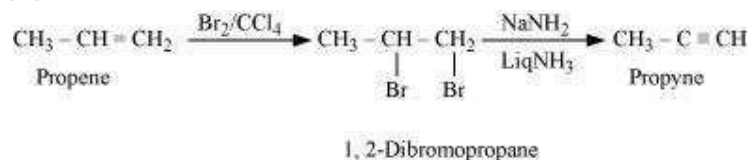
Question 10.11:

How will you bring about the following conversions?

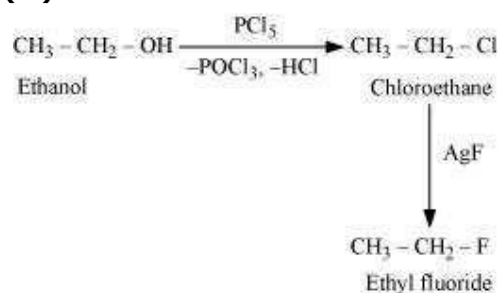
- (i) Ethanol to but-1-yne
- (ii) Ethane to bromoethene
- (iii) Propene to 1-nitropropane
- (iv) Toluene to benzyl alcohol
- (v) Propene to propyne
- (vi) Ethanol to ethyl fluoride
- (vii) Bromomethane to propanone
- (viii) But-1-ene to but-2-ene
- (ix) 1-Chlorobutane to n-octane
- (x) Benzene to biphenyl.

Answer

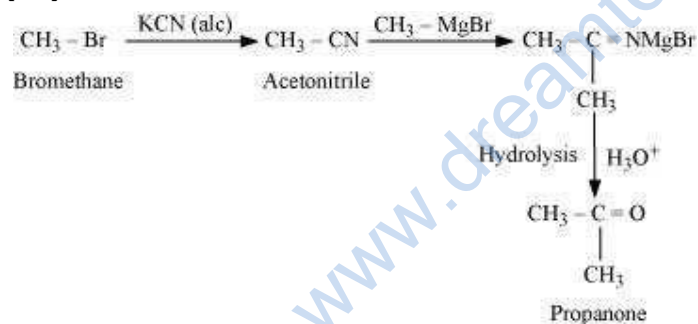
(v)



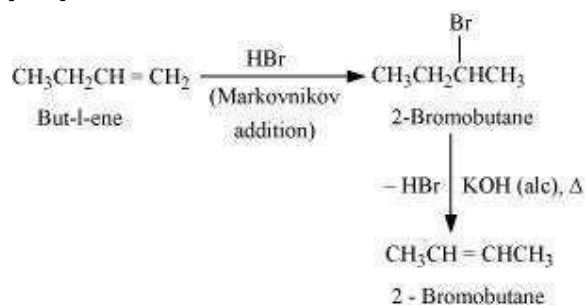
(vi)



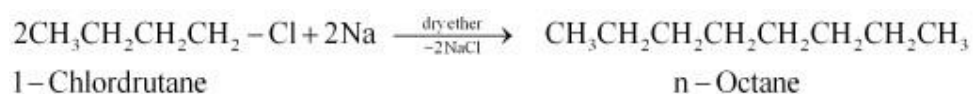
(vii)



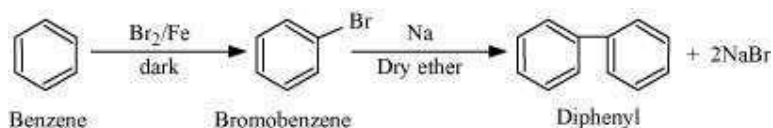
(viii)



(ix)



(x)



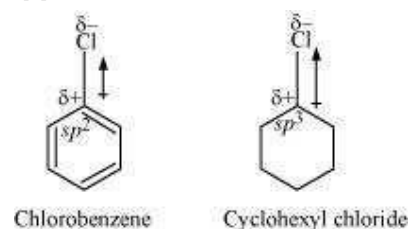
Question 10.12:

Explain why

- (i) the dipole moment of chlorobenzene is lower than that of cyclohexyl chloride?
- (ii) alkyl halides, though polar, are immiscible with water?
- (iii) Grignard reagents should be prepared under anhydrous conditions?

Answer

(i)



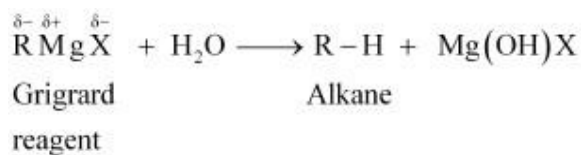
In chlorobenzene, the Cl-atom is linked to a sp^2 hybridized carbon atom. In cyclohexyl chloride, the Cl-atom is linked to a sp^3 hybridized carbon atom. Now, sp^2 hybridized carbon has more s-character than sp^3 hybridized carbon atom. Therefore, the former is more electronegative than the latter. Therefore, the density of electrons of C–Cl bond near the Cl-atom is less in chlorobenzene than in cyclohexyl chloride.

Moreover, the $-R$ effect of the benzene ring of chlorobenzene decreases the electron density of the C–Cl bond near the Cl-atom. As a result, the polarity of the C–Cl bond in chlorobenzene decreases. Hence, the dipole moment of chlorobenzene is lower than that of cyclohexyl chloride.

(ii) To be miscible with water, the solute-water force of attraction must be stronger than the solute-solute and water-water forces of attraction. Alkyl halides are polar molecules and so held together by dipole-dipole interactions. Similarly, strong H-bonds exist between the water molecules. The new force of attraction between the alkyl halides

and water molecules is weaker than the alkyl halide-alkyl halide and water-water forces of attraction. Hence, alkyl halides (though polar) are immiscible with water.

(iii) Grignard reagents are very reactive. In the presence of moisture, they react to give alkanes.



Therefore, Grignard reagents should be prepared under anhydrous conditions.

Question 10.13:

Give the uses of freon 12, DDT, carbon tetrachloride and iodoform.

Answer

Uses of Freon – 12

Freon-12 (dichlorodifluoromethane, CF_2Cl_2) is commonly known as CFC. It is used as a refrigerant in refrigerators and air conditioners. It is also used in aerosol spray propellants such as body sprays, hair sprays, etc. However, it damages the ozone layer. Hence, its manufacture was banned in the United States and many other countries in 1994.

Uses of DDT

DDT (*p, p*-dichlorodiphenyltrichloroethane) is one of the best known insecticides. It is very effective against mosquitoes and lice. But due its harmful effects, it was banned in the United States in 1973.

Uses of carbontetrachloride (CCl_4)

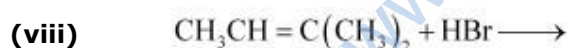
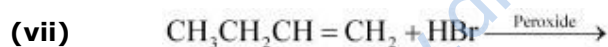
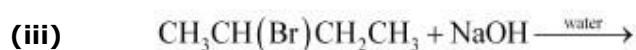
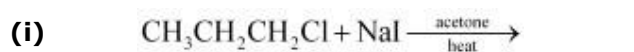
- (i)** It is used for manufacturing refrigerants and propellants for aerosol cans.
- (ii)** It is used as feedstock in the synthesis of chlorofluorocarbons and other chemicals.
- (iii)** It is used as a solvent in the manufacture of pharmaceutical products.
- (iv)** Until the mid 1960's, carbon tetrachloride was widely used as a cleaning fluid, a degreasing agent in industries, a spot reamer in homes, and a fire extinguisher.

Uses of iodoform (CHI₃)

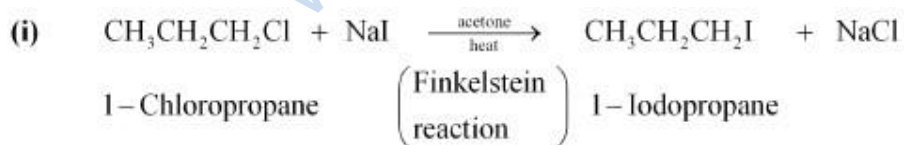
Iodoform was used earlier as an antiseptic, but now it has been replaced by other formulations-containing iodine-due to its objectionable smell. The antiseptic property of iodoform is only due to the liberation of free iodine when it comes in contact with the skin.

Question 10.14:

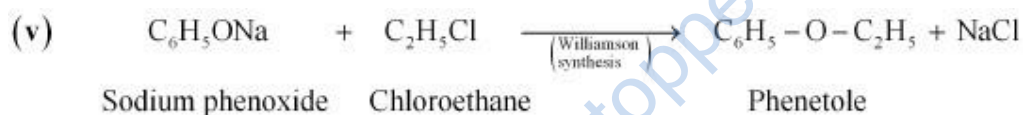
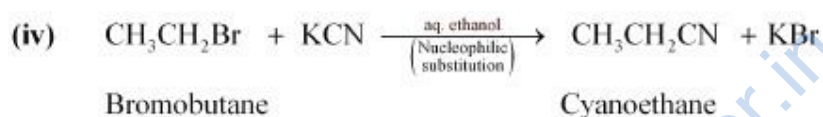
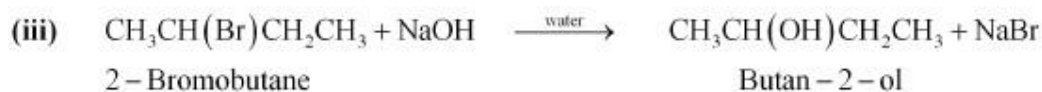
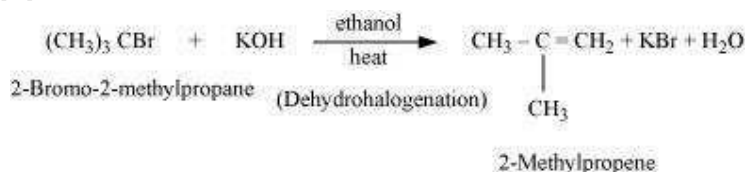
Write the structure of the major organic product in each of the following reactions:



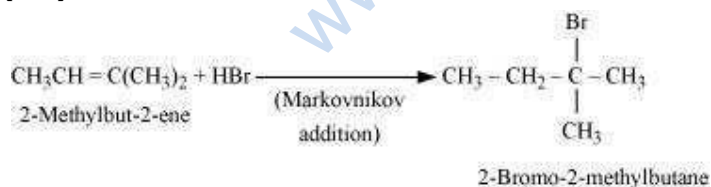
Answer



(ii)



(viii)




Question 10.15:

Write the mechanism of the following reaction:

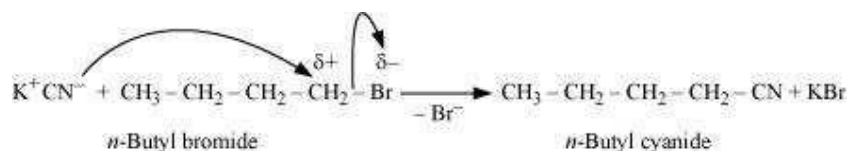


Answer

The given reaction is:



The given reaction is an S_N2 reaction. In this reaction, CN^- acts as the nucleophile and attacks the carbon atom to which Br is attached. CN^- ion is an ambident nucleophile and can attack through both C and N. In this case, it attacks through the C-atom.



Question 10.16:

Arrange the compounds of each set in order of reactivity towards S_N2 displacement: **(i)**

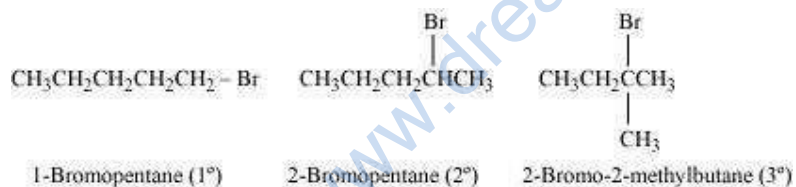
2-Bromo-2-methylbutane, 1-Bromopentane, 2-Bromopentane

(ii) 1-Bromo-3-methylbutane, 2-Bromo-2-methylbutane, 3-Bromo-2-methylbutane **(iii)**

1-Bromobutane, 1-Bromo-2,2-dimethylpropane, 1-Bromo-2-methylbutane, 1-Bromo-3-methylbutane.

Answer

(i)



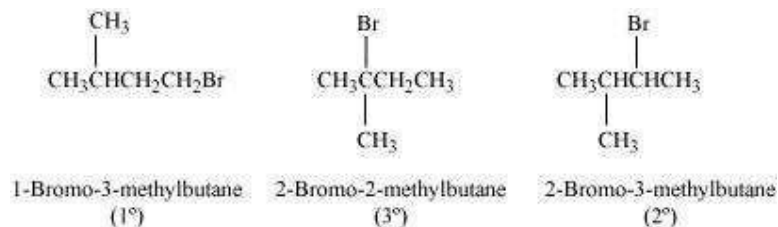
An S_N2 reaction involves the approaching of the nucleophile to the carbon atom to which the leaving group is attached. When the nucleophile is sterically hindered, then the reactivity towards S_N2 displacement decreases. Due to the presence of substituents, hindrance to the approaching nucleophile increases in the following order.

1-Bromopentane < 2-bromopentane < 2-Bromo-2-methylbutane

Hence, the increasing order of reactivity towards S_N2 displacement is:

2-Bromo-2-methylbutane < 2-Bromopentane < 1-Bromopentane

(ii)

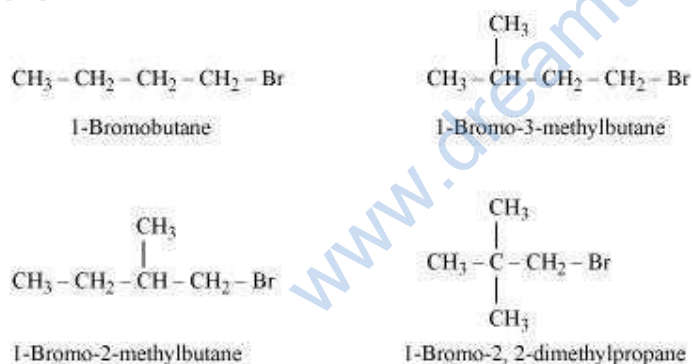


Since steric hindrance in alkyl halides increases in the order of $1^\circ < 2^\circ < 3^\circ$, the increasing order of reactivity towards S_N2 displacement is $3^\circ < 2^\circ < 1^\circ$.

Hence, the given set of compounds can be arranged in the increasing order of their reactivity towards S_N2 displacement as:

2-Bromo-2-methylbutane < 2-Bromo-3-methylbutane < 1-Bromo-3-methylbutane [2-Bromo-3-methylbutane is incorrectly given in NCERT]

(iii)



The steric hindrance to the nucleophile in the S_N2 mechanism increases with a decrease in the distance of the substituents from the atom containing the leaving group. Further, the steric hindrance increases with an increase in the number of substituents. Therefore, the increasing order of steric hindrances in the given compounds is as below:

1-Bromobutane < 1-Bromo-3-methylbutane < 1-Bromo-2-methylbutane
< 1-Bromo-2, 2-dimethylpropane

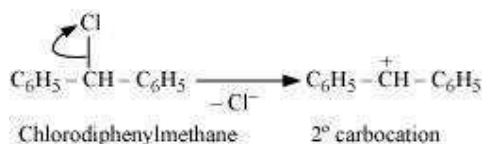
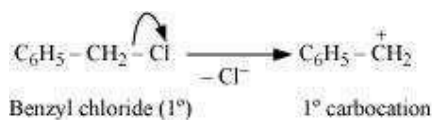
Hence, the increasing order of reactivity of the given compounds towards S_N2 displacement is:

1-Bromo-2, 2-dimethylpropane < 1-Bromo-2-methylbutane < 1-Bromo-3-methylbutane
< 1-Bromobutane

Question 10.17:

Out of $C_6H_5CH_2Cl$ and $C_6H_5CHClC_6H_5$, which is more easily hydrolysed by aqueous KOH?

Answer



Hydrolysis by aqueous KOH proceeds through the formation of carbocation. If carbocation is stable, then the compound is easily hydrolyzed by aqueous KOH. Now,

$C_6H_5CH_2Cl$ forms 1° -carbocation, while $C_6H_5CHClC_6H_5$ forms 2° -carbocation, which is more stable than 1° -carbocation. Hence, $C_6H_5CHClC_6H_5$ is hydrolyzed more easily than

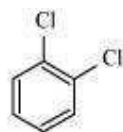
$C_6H_5CH_2Cl$ by aqueous KOH.

Question 10.18: *p*-Dichlorobenzene has higher m.p. and lower solubility than those of *o*- and *m*-isomers. Discuss.

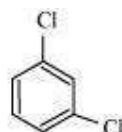
Answer



p-Dichlorobenzene



o-Dichlorobenzene



m-Dichlorobenzene

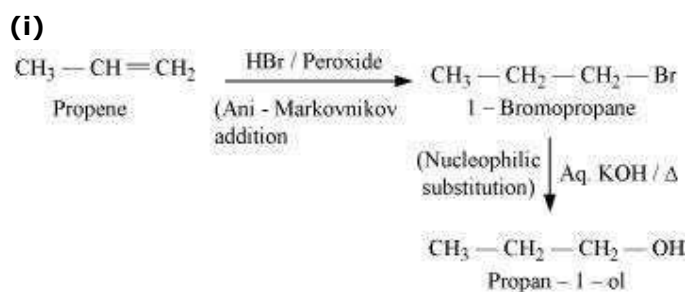
p-Dichlorobenzene is more symmetrical than *o*- and *m*-isomers. For this reason, it fits more closely than *o*- and *m*-isomers in the crystal lattice. Therefore, more energy is required to break the crystal lattice of *p*-dichlorobenzene. As a result, *p*-dichlorobenzene has a higher melting point and lower solubility than *o*- and *m*-isomers.

Question 10.19:

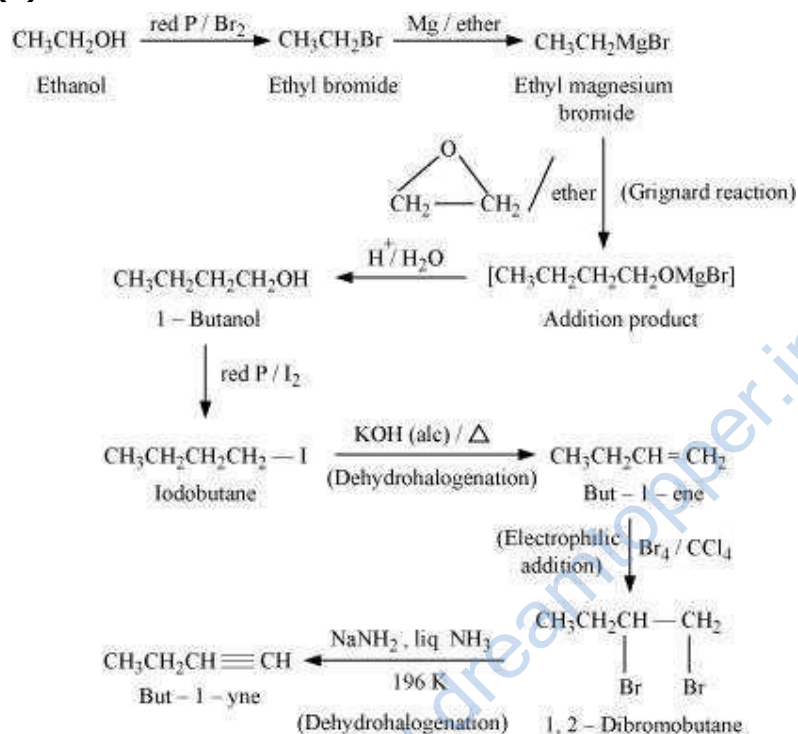
How the following conversions can be carried out?

- (i) Propene to propan-1-ol
- (ii) Ethanol to but-1-yne
- (iii) 1-Bromopropane to 2-bromopropane
- (iv) Toluene to benzyl alcohol
- (v) Benzene to 4-bromonitrobenzene
- (vi) Benzyl alcohol to 2-phenylethanoic acid
- (vii) Ethanol to propanenitrile
- (viii) Aniline to chlorobenzene
- (ix) 2-Chlorobutane to 3, 4-dimethylhexane
- (x) 2-Methyl-1-propene to 2-chloro-2-methylpropane
- (xi) Ethyl chloride to propanoic acid
- (xii) But-1-ene to n-butyliodide
- (xiii) 2-Chloropropane to 1-propanol
- (xiv) Isopropyl alcohol to iodoform
- (xv) Chlorobenzene to *p*-nitrophenol
- (xvi) 2-Bromopropane to 1-bromopropane
- (xvii) Chloroethane to butane
- (xviii) Benzene to diphenyl
- (xix) *tert*-Butyl bromide to isobutyl bromide
- (xx) Aniline to phenylisocyanide

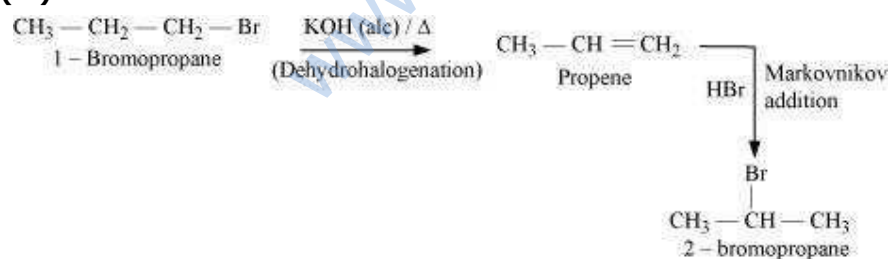
Answer



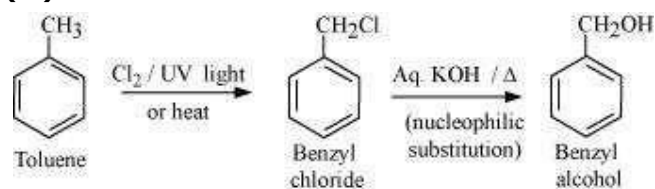
(ii)



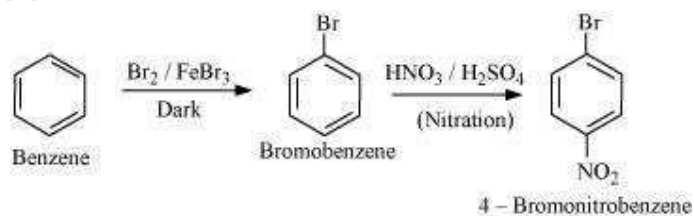
(iii)



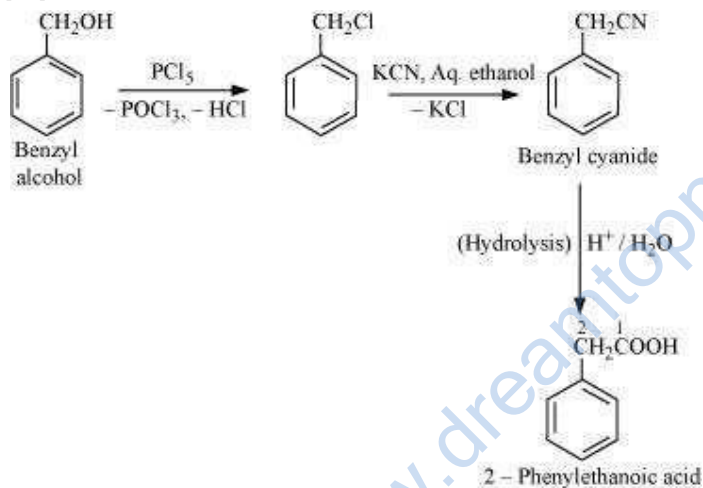
(iv)



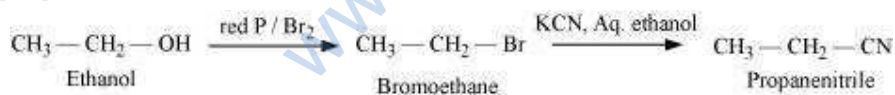
(v)



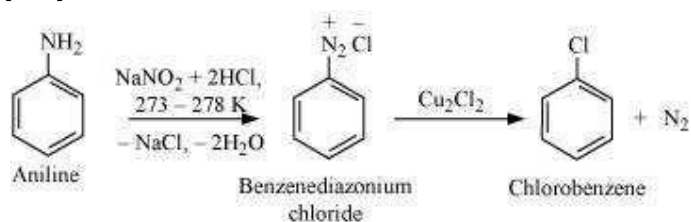
(vi)



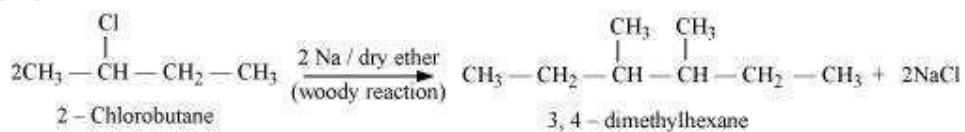
(vii)



(viii)



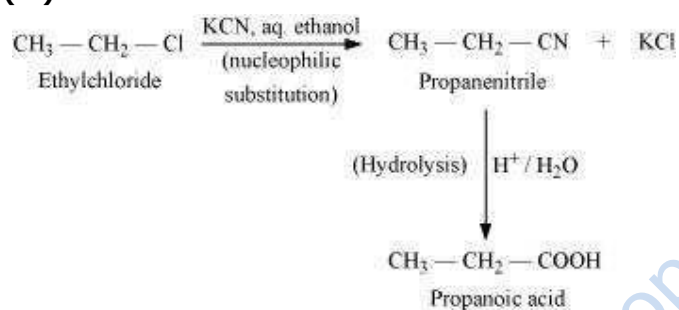
(ix)



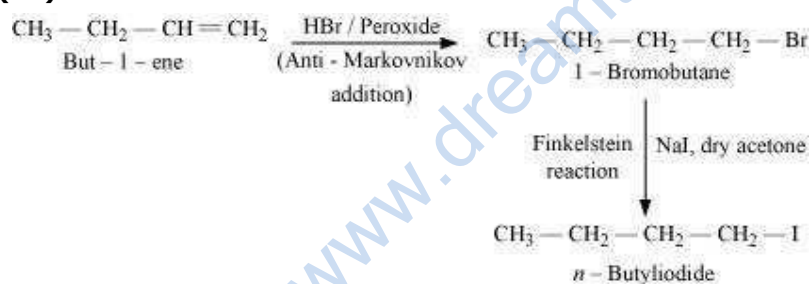
(x)



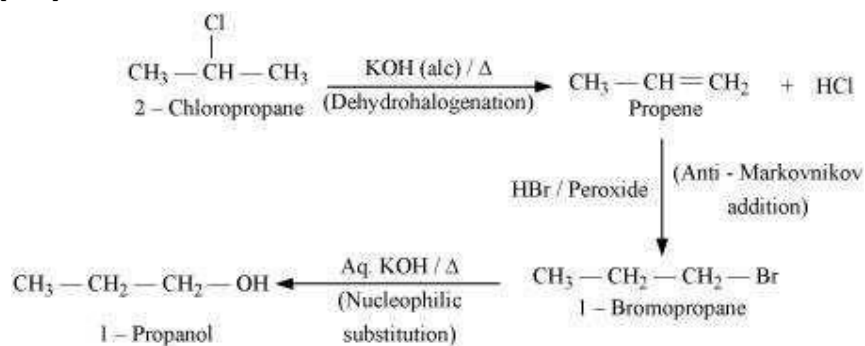
(xi)



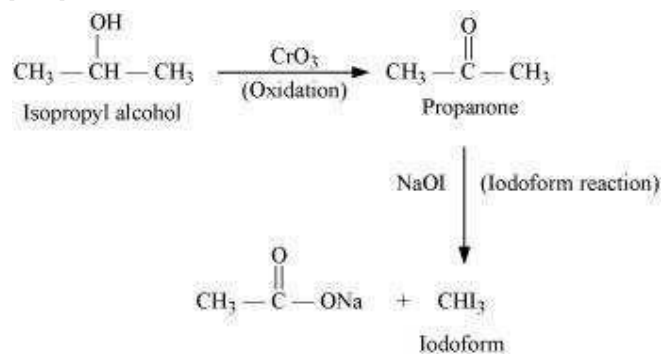
(xii)



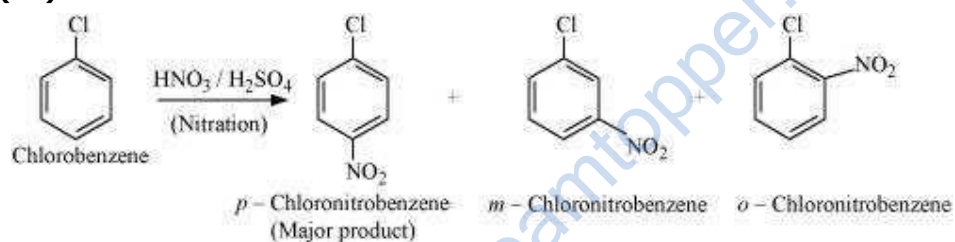
(xiii)



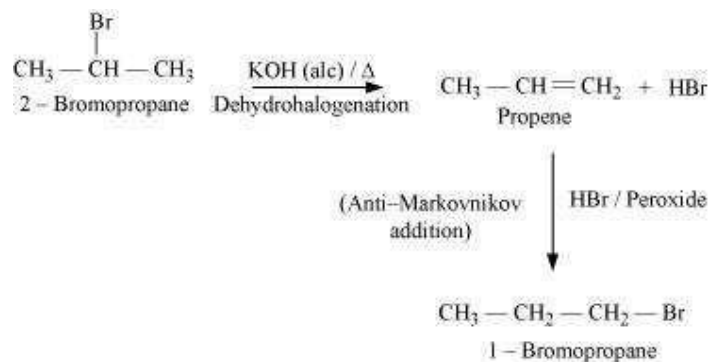
(xiv)



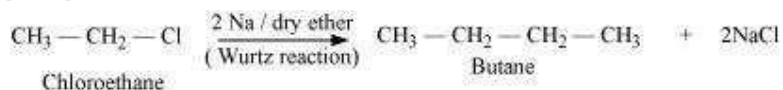
(xv)



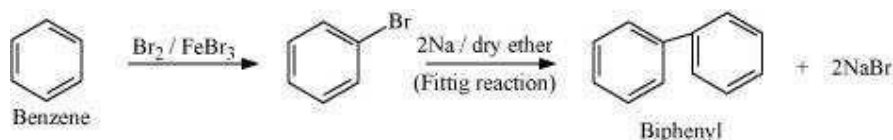
(xvi)



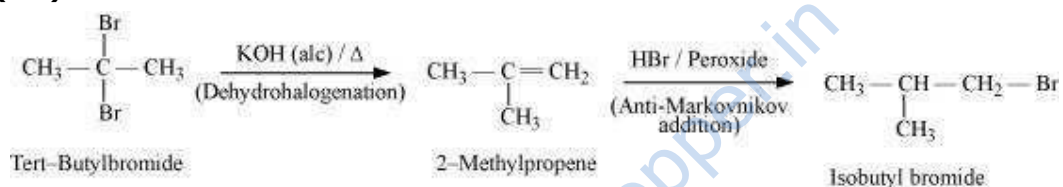
(xvii)



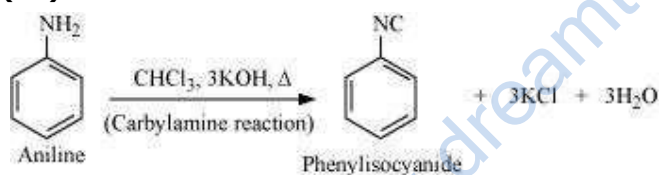
(xviii)



(xix)



(xx)



Question 10.20:

The treatment of alkyl chlorides with aqueous KOH leads to the formation of alcohols but in the presence of alcoholic KOH, alkenes are major products. Explain.

Answer

In an aqueous solution, KOH almost completely ionizes to give OH⁻ ions. OH⁻ ion is a strong nucleophile, which leads the alkyl chloride to undergo a substitution reaction to form alcohol.

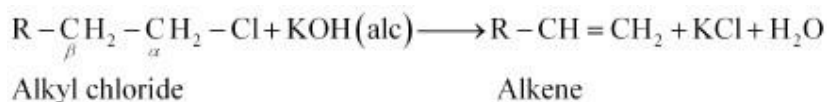


Alkyl

Alcohol

chloride

On the other hand, an alcoholic solution of KOH contains alkoxide (RO^-) ion, which is a strong base. Thus, it can abstract a hydrogen from the β -carbon of the alkyl chloride and form an alkene by eliminating a molecule of HCl.



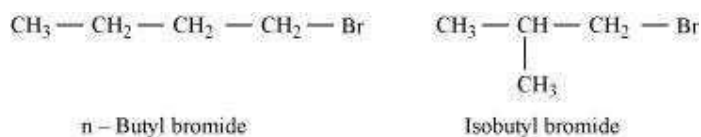
OH^- ion is a much weaker base than RO^- ion. Also, OH^- ion is highly solvated in an aqueous solution and as a result, the basic character of OH^- ion decreases. Therefore, it cannot abstract a hydrogen from the β -carbon.

Question 10.21:

Primary alkyl halide $\text{C}_4\text{H}_9\text{Br}$ (a) reacted with alcoholic KOH to give compound (b). Compound (b) is reacted with HBr to give (c) which is an isomer of (a). When (a) is reacted with sodium metal it gives compound (d), C_8H_{18} which is different from the compound formed when *n*-butyl bromide is reacted with sodium. Give the structural formula of (a) and write the equations for all the reactions.

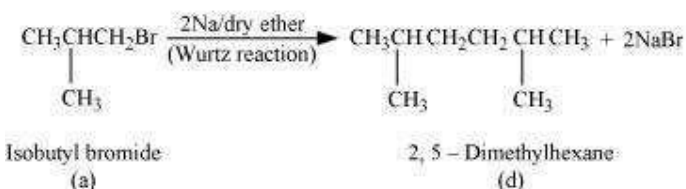
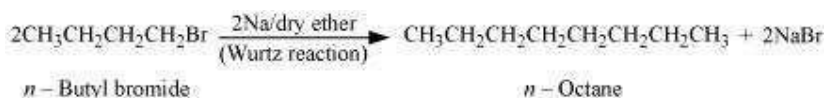
Answer

There are two primary alkyl halides having the formula, $\text{C}_4\text{H}_9\text{Br}$. They are *n*-butyl bromide and isobutyl bromide.




Therefore, compound (a) is either *n*-butyl bromide or isobutyl bromide.

Now, compound (a) reacts with Na metal to give compound (b) of molecular formula, C_8H_{18} , which is different from the compound formed when *n*-butyl bromide reacts with Na metal. Hence, compound (a) must be isobutyl bromide.

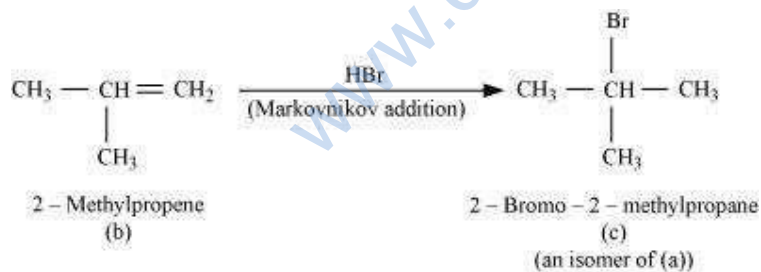


Thus, compound (d) is 2, 5-dimethylhexane.

It is given that compound (a) reacts with alcoholic KOH to give compound (b). Hence, compound (b) is 2-methylpropene.



Also, compound (b) reacts with HBr to give compound (c) which is an isomer of (a). Hence, compound (c) is 2-bromo-2-methylpropane.



Question 10.22:

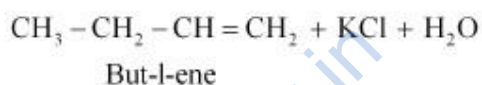
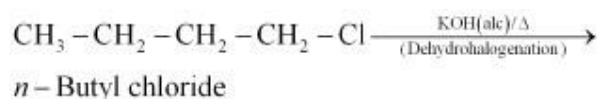
What happens when

- (i) *n*-butyl chloride is treated with alcoholic KOH,
- (ii) bromobenzene is treated with Mg in the presence of dry ether,
- (iii) chlorobenzene is subjected to hydrolysis,
- (iv) ethyl chloride is treated with aqueous KOH,

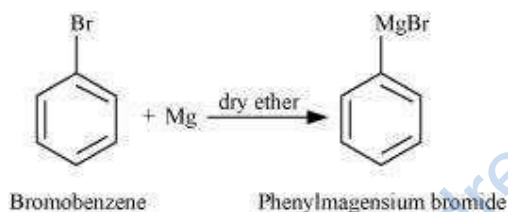
(v) methyl bromide is treated with sodium in the presence of dry ether, (vi) methyl chloride is treated with KCN.

Answer


(i) When n-butyl chloride is treated with alcoholic KOH, the formation of but-1-ene takes place. This reaction is a dehydrohalogenation reaction.



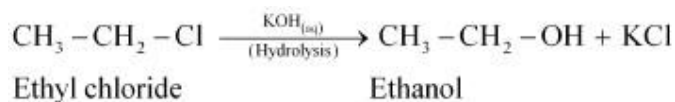
(ii) When bromobenzene is treated with Mg in the presence of dry ether, phenylmagnesium bromide is formed.



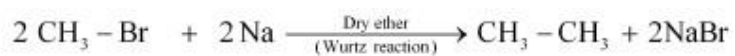
(iii) Chlorobenzene does not undergo hydrolysis under normal conditions. However, it undergoes hydrolysis when heated in an aqueous sodium hydroxide solution at a temperature of 623 K and a pressure of 300 atm to form phenol.



(iv) When ethyl chloride is treated with aqueous KOH, it undergoes hydrolysis to form ethanol.



(v) When methyl bromide is treated with sodium in the presence of dry ether, ethane is formed. This reaction is known as the Wurtz reaction.



Methyl bromide

Ethane

(vi) When methyl chloride is treated with KCN, it undergoes a substitution reaction to give methyl cyanide.



Methylchloride

Methyl cyanide

www.dreamtopper.in