

Chemical Kinetics

Multiple Choice Questions (MCQs)

Q. 1 The role of a catalyst is to change

- (a) Gibbs energy of reaction (b) enthalpy of reaction
(c) activation energy of reaction (d) equilibrium constant

Ans. (c) The role of a catalyst is to change the activation energy of reaction. This is done by either increasing or decreasing activation energy of molecule as catalyst are mainly of two types; +ve catalyst and -ve catalyst.

Note Catalyst are of two types one is positive catalyst which increases rate of reaction by decreasing activation energy and another is negative catalyst which decreases rate of reaction by increasing energy of activation.

Q. 2 In the presence of a catalyst, the heat evolved or absorbed during the reaction

- (a) increases (b) decreases
(c) remains unchanged (d) may increase or decrease

Ans. (c) In the presence of catalyst, the heat absorbed, or evolved during the reaction remains unchanged as there is no change in stability of reactant and product.

Q. 3 Activation energy of a chemical reaction can be determined by

- (a) determining the rate constant at standard temperature
(b) determining the rate constant at two temperatures
(c) determining probability of collision
(d) using catalyst

Ans. (b) Activation energy of a chemical reaction is related to rate constant of a reaction at two different temperatures i.e., k_1 and k_2 respectively

$$\ln \left(\frac{k_1}{k_2} \right) = \frac{E_a}{R} \left[\frac{1}{T_1} - \frac{1}{T_2} \right]$$

where,

E_a = activation energy

T_2 = higher temperature

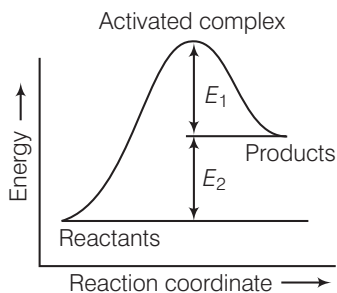
T_1 = lower temperature

k_1 = rate constant at temperature T_1

k_2 = rate constant at temperature T_2

This equation is known as Arrhenius equation.

Q. 4 Consider figure and mark the correct option.



- (a) Activation energy of forward reaction is $E_1 + E_2$ and product is less stable than reactant
 (b) Activation energy of forward reaction is $E_1 + E_2$ and product is more stable than reactant
 (c) Activation energy of both forward and backward reaction is $E_1 + E_2$ and reactant is more stable than product
 (d) Activation energy of backward reaction is E_1 and product is more stable than reactant

Ans. (a) Activation energy is the minimum energy required to convert reactant molecules to product molecules. Here, the energy gap between reactants and activated complex is sum of E_1 and E_2 .

$$\therefore \text{Activation energy} = E_1 + E_2$$

Product is less stable than reactant as energy of product is greater than the reactant.

Q. 5 Consider a first order gas phase decomposition reaction given below



The initial pressure of the system before decomposition of A was p_i . After lapse of time 't' total pressure of the system increased by x units and became ' p_t '. The rate constant k for the reaction is given as

$$(a) k = \frac{2.303}{t} \log \frac{p_i}{p_i - x}$$

$$(b) k = \frac{2.303}{t} \log \frac{p_i}{2p_i - p_t}$$

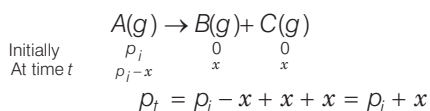
$$(c) k = \frac{2.303}{t} \log \frac{p_i}{2p_i + p_t}$$

$$(d) k = \frac{2.303}{t} \log \frac{p_i}{p_i + x}$$

Thinking Process

This problem is based on first order rate of reaction. To solve this question determine the value of total pressure then calculate value of x followed by rate constant. where, x = pressure of gas transform to product

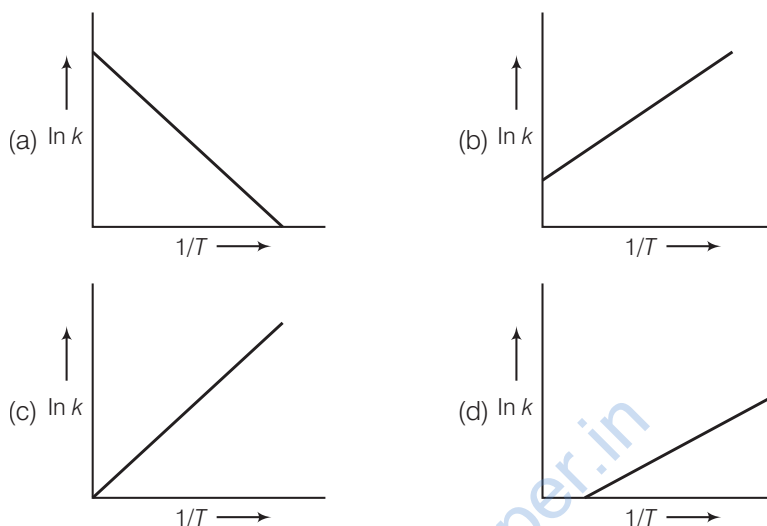
Ans. (b)



For first order reaction

$$\begin{aligned}
 x &= p_t - p_i \\
 k &= \frac{2.303}{t} \log \frac{p_i}{p_i - x} \\
 &= \frac{2.303}{t} \log \frac{p_i}{p_i - (p_t - p_i)} \\
 &= \frac{2.303}{t} \log \frac{p_i}{2p_i - p_t}
 \end{aligned}$$

Q. 6 According to Arrhenius equation rate constant k is equal to $A e^{-E_a/RT}$
Which of the following options represents the graph of $\ln k$ vs $\frac{1}{T}$?



Thinking Process

This problem include graphical representation of Arrhenius equation. To solve this problem transform the Arrhenius equation into equation of straight line taking $\ln k$ on x -axis and $\frac{1}{T}$ on y -axis

Ans. (a) According to Arrhenius equation, $k = A e^{-E_a/RT}$

Taking log on both side $\ln k = \ln(A.e^{-\frac{E_a}{RT}})$

$$\ln k = \ln A - \frac{E_a}{RT}$$

$$\ln k = -\frac{E_a}{R} \times \frac{1}{T} + \ln A$$

$$y = m x + c$$

This equation can be related to equation of straight line as shown above.

From the graph, it is very clear that slope of the plot = $-\frac{E_a}{R}$ and intercept = $\ln A$.

Q. 7 Consider the Arrhenius equation given below and mark the correct option.

$$k = A e^{-\frac{E_a}{RT}}$$

- (a) Rate constant increases exponentially with increasing activation energy and decreasing temperature
- (b) Rate constant decreases exponentially with increasing activation energy and decreasing temperature
- (c) Rate constant increases exponentially with decreasing activation energy and decreasing temperature
- (d) Rate constant increases exponentially with decreasing activation energy and increasing temperature

Ans. (d) According to Arrhenius equation $k = A e^{-E_a/RT}$

Here,

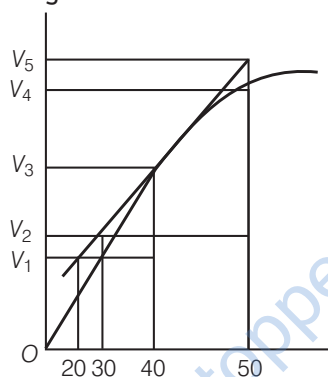
$$k \propto e^{-E_a}$$

$$k \propto e^{-\frac{1}{T}}$$

$$\propto e^T$$

which indicates that as activation energy decreases rate constant increases and as temperature increases rate of reaction increases.

Q. 8 A graph of volume of hydrogen released vs time for the reaction between zinc and dil. HCl is given in figure. On the basis of this mark the correct option.



- (a) Average rate upto 40 s is $\frac{V_3 - V_2}{40}$ (b) Average rate upto 40 s is $\frac{V_3 - V_2}{40 - 30}$
 (c) Average rate upto 40 s is $\frac{V_3}{40}$ (d) Average rate upto 40 s is $\frac{V_3 - V_1}{40 - 20}$

Ans. (c) $\text{Zn} + \text{Dil. HCl} \longrightarrow \text{ZnCl}_2 + \text{H}_2 \uparrow$

$$\text{Average rate of reaction} = \frac{\text{Change in concentration of H}_2}{\text{Change in time}} = \frac{V_3 - 0}{40 - 0} = \frac{V_3}{40}$$

Q. 9 Which of the following statements is not correct about order of a reaction?

- (a) The order of a reaction can be a fractional number
 (b) Order of a reaction is experimentally determined quantity
 (c) The order of a reaction is always equal to the sum of the stoichiometric coefficients of reactants in the balanced chemical equation for a reaction
 (d) The order of a reaction is the sum of the powers of molar concentration of the reactants in the rate law expression

Ans. (c) Out of the given four statements, option (c) is not correct.

Order of Reaction

Order of reaction is equal to the sum of powers of concentration of the reactants in rate law expression.

For any chemical reaction

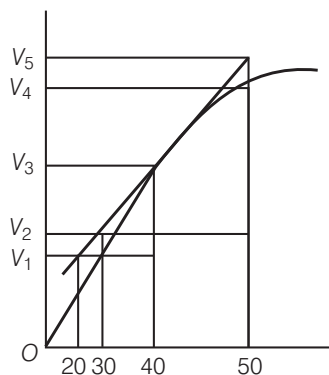


$$\text{Rate} = k [A]^x [B]^y$$

$$\text{Order} = x + y$$

Order of reaction can be a fraction also. Order of reaction is not always equal to sum of the stoichiometric coefficients of reactants in the balanced chemical equation. For a reaction it may or may not be equal to sum of stoichiometric coefficient of reactants.

Q. 10 Consider the graph given in figure. Which of the following options does not show instantaneous rate of reaction at 40s?



- (a) $\frac{V_5 - V_2}{50 - 30}$ (b) $\frac{V_4 - V_2}{50 - 30}$ (c) $\frac{V_3 - V_2}{40 - 30}$ (d) $\frac{V_3 - V_1}{40 - 20}$

Ans. (b) Reaction occurring at smallest time interval is known as instantaneous rate of reaction e.g., instantaneous rate of reaction at 40 s is rate of reaction during a small interval of time close to 40 s. Volume change during a small time interval close to 40 s i.e., 40 – 30 s, 50 – 40 s, 50 – 30 s, 40 – 20 s.

$$\text{Instantaneous rate of reaction} = \frac{\text{Change in volume}}{\text{Time interval close to 40 s}}$$

(a) $r_{\text{inst}} (20 \text{ s}) = \frac{V_5 - V_2}{50 - 30}$ correct

(b) $r_{\text{inst}} (20 \text{ s}) = \frac{V_4 - V_3}{50 - 30}$ incorrect, correct is $\frac{V_5 - V_3}{50 - 30}$

(c) $r_{\text{inst}} (10 \text{ s}) = \frac{V_3 - V_2}{40 - 30}$ correct

(d) $r_{\text{inst}} (20 \text{ s}) = \frac{V_3 - V_1}{40 - 20}$ correct

Q. 11 Which of the following statements is correct?

- (a) The rate of a reaction decreases with passage of time as the concentration of reactants decreases
 (b) The rate of a reaction is same at any time during the reaction
 (c) The rate of a reaction is independent of temperature change
 (d) The rate of a reaction decreases with increase in concentration of reactant (s)

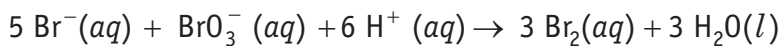
Ans. (a) Rate of reaction is defined as rate of decrease of concentration of any one of reactant with passage of time

$$\text{Rate of reaction} = \frac{\text{Rate of disappearance of reactant}}{\text{Time taken}}$$

$$r = \frac{-dx}{dt}$$

Thus, as the concentration of reactant decreases with passage of time, rate of reaction decreases.

Q. 12 Which of the following expressions is correct for the rate of reaction given below?



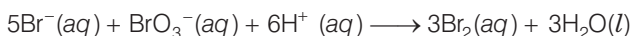
(a) $\frac{\Delta[\text{Br}^-]}{\Delta t} = 5 \frac{\Delta[\text{H}^+]}{\Delta t}$

(b) $\frac{\Delta[\text{Br}^-]}{\Delta t} = \frac{6}{5} \frac{\Delta[\text{H}^+]}{\Delta t}$

(c) $\frac{\Delta[\text{Br}^-]}{\Delta t} = \frac{5}{6} \frac{\Delta[\text{H}^+]}{\Delta t}$

(d) $\frac{\Delta[\text{Br}^-]}{\Delta t} = 6 \frac{\Delta[\text{H}^+]}{\Delta t}$

Ans. (c) Given, chemical reaction is



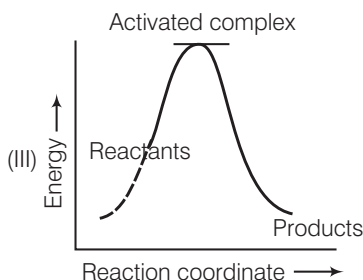
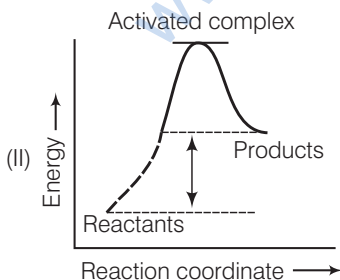
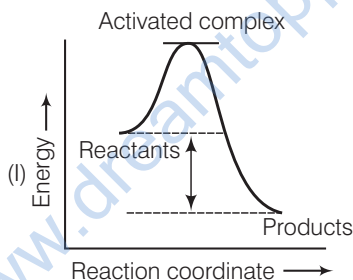
Rate law expression for the above equation can be written as

$$-\frac{1}{5} \frac{\Delta[\text{Br}^-]}{\Delta t} = -\frac{\Delta[\text{BrO}_3^-]}{\Delta t} = \frac{-1}{6} \frac{\Delta[\text{H}^+]}{\Delta t} = \frac{+1}{3} \frac{\Delta[\text{Br}_2]}{\Delta t}$$

$$\Rightarrow \frac{\Delta[\text{Br}^-]}{\Delta t} = -\frac{\Delta[\text{BrO}_3^-]}{\Delta t} = \frac{-5}{6} \frac{\Delta[\text{H}^+]}{\Delta t}$$

$$\Rightarrow \frac{\Delta[\text{Br}^-]}{\Delta t} = \frac{5}{6} \frac{\Delta[\text{H}^+]}{\Delta t}$$

Q. 13 Which of the following graphs represents exothermic reaction?



(a) Only (I)

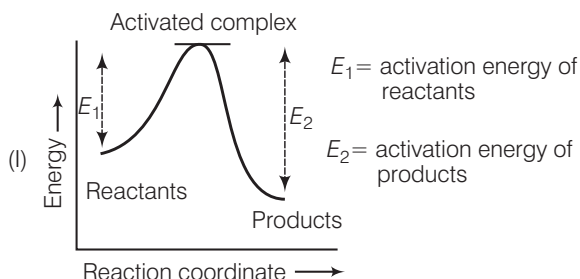
(b) Only (II)

(c) Only (III)

(d) (I) and (II)

Ans. (a) The chemical reaction in which energy is evolved during the reaction is known as exothermic reaction i.e., activation energy of product is greater than activation energy of reactants.

Here, only (I) denotes correct picture of exothermic reaction.



Q. 14 Rate law for the reaction $A + 2B \longrightarrow C$ is found to be

$$\text{Rate} = k[A][B]$$

Concentration of reactant 'B' is doubled, keeping the concentration of 'A' constant, the value of rate constant will be..... .

- (a) the same (b) doubled
(c) quadrupled (d) halved

Ans. (b) Rate law can be written as

$$\text{Rate} = k[A][B]$$

Rate of reaction w.r.t B is of first order.

$$R_1 = k [A] [B]$$

when concentration of reactant 'B' is doubled then rate (R_2)

$$R_2 = k [A] [2B]$$

$$R_2 = 2k [A] [B]$$

$$R_2 = 2 R_1$$

Therefore; as concentration of B is doubled keeping the concentration of A constant rate of reaction doubles.

Q. 15 Which of the following statements is incorrect about the collision theory of chemical reaction?

- (a) It considers reacting molecules or atoms to be hard spheres and ignores their structural features
(b) Number of effective collisions determines the rate of reaction
(c) Collision of atoms or molecules possessing sufficient threshold energy results into the product formation
(d) Molecules should collide with sufficient threshold energy and proper orientation for the collision to be effective

Ans. (c) According to the postulates of collision theory there are following necessary conditions for any reaction to occur

- (i) Molecule should collide with sufficient threshold energy.
(ii) Their orientation must be proper.
(iii) The collision must be effective.

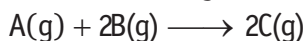
Q. 16 A first order reaction is 50% completed in 1.26×10^{14} s. How much time would it take for 100% completion?

- (a) 1.26×10^{15} s (b) 2.52×10^{14} s
(c) 2.52×10^{28} s (d) Infinite

Ans. (d) The time taken for half the reaction to complete. i.e., the time in which the concentration of a reactant is reduced to half of its original value is called half-life period of the reaction.

But it is impossible to perform 100% of the reaction. Whole of the substance never reacts because in every half-life, 50% of the substance reacts. Hence, time taken for 100% completion of a reaction is infinite.

Q. 17 Compounds 'A' and 'B' react according to the following chemical equation.



Concentration of either 'A' or 'B' were changed keeping the concentrations of one of the reactants constant and rates were measured as a function of initial concentration. Following results were obtained. Choose the correct option for the rate equations for this reaction.

Experiment	Initial concentration of [A]/mol L ⁻¹	Initial concentration of [B]/mol L ⁻¹	Initial concentration of [C]/mol L ⁻¹ s ⁻¹
1.	0.30	0.30	0.10
2.	0.30	0.60	0.40
3.	0.60	0.30	0.20

(a) Rate = $k[A]^2[B]$

(b) Rate = $k[A][B]^2$

(c) Rate = $k[A][B]$

(d) Rate = $k[A]^2[B]^0$

Ans. (b) Rate of reaction is change in concentration of reactant with respect to time.

$$r = k[A]^x[B]^y$$

$$\frac{\text{Rate of exp.1}}{\text{Rate of exp.2}} = \frac{[0.30]^x [0.30]^y}{[0.30]^x [0.60]^y}$$

$$\frac{0.10}{0.40} = \frac{[0.30]^y}{[0.60]^y}$$

$$\frac{1}{4} = \left[\frac{1}{2}\right]^y$$

$$\left[\frac{1}{2}\right]^2 = \left[\frac{1}{2}\right]^y$$

$$y = 2$$

$$\frac{\text{Rate of exp.1}}{\text{Rate of exp.3}} = \frac{[0.30]^x [0.30]^y}{[0.60]^x [0.30]^y}$$

$$\frac{0.10}{0.20} = \left[\frac{0.30}{0.60}\right]^x \left[\frac{0.30}{0.30}\right]^y$$

$$\frac{1}{2} = \left[\frac{1}{2}\right]^x [1]^y$$

$$\frac{1}{2} = \left[\frac{1}{2}\right]^x$$

$$x = 1$$

$$\text{Rate} = k[A]^x [B]^y$$

$$\text{Rate} = k[A]^1 [B]^2$$

i.e.,
∴

Q. 18 Which of the following statement is not correct for the catalyst?

(a) It catalyses the forward and backward reactions to the same extent

(b) It alters ΔG of the reaction

(c) It is a substance that does not change the equilibrium constant of a reaction

(d) It provides an alternate mechanism by reducing activation energy between reactants and products

Ans. (b) Characteristics of catalyst

- (a) It catalyses the forward and backward reaction to the same extent as it decreases energy of activation hence, increases the rate of both the reactions.
- (b) Since, reaction quotient is the relation between concentration of reactants and products. Hence, catalyst does not alter Gibbs free energy as it is related to reaction quotient. Thus, Gibbs free energy does not change during the reaction when catalyst is added to it.

$$\Delta G = -RT \ln Q$$

where, Q = reaction quotient

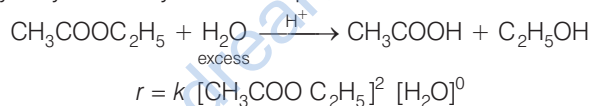
- (c) It doesn't alter equilibrium of reaction as equilibrium constant is also concentration dependent term.
- (d) It provides an alternate mechanism by reducing activation energy between reactants and products.

Q. 19 The value of rate constant of a pseudo first order reaction

- (a) depends on the concentration of reactants present in small amount
- (b) depends on the concentration of reactants present in excess
- (c) is independent of the concentration of reactants
- (d) depends only on temperature

Ans. (a, b) Pseudo first order reaction is a chemical reaction in which rate of reaction depends upon concentration of only one reactant while concentration of another reactant has no effect on rate of reaction.

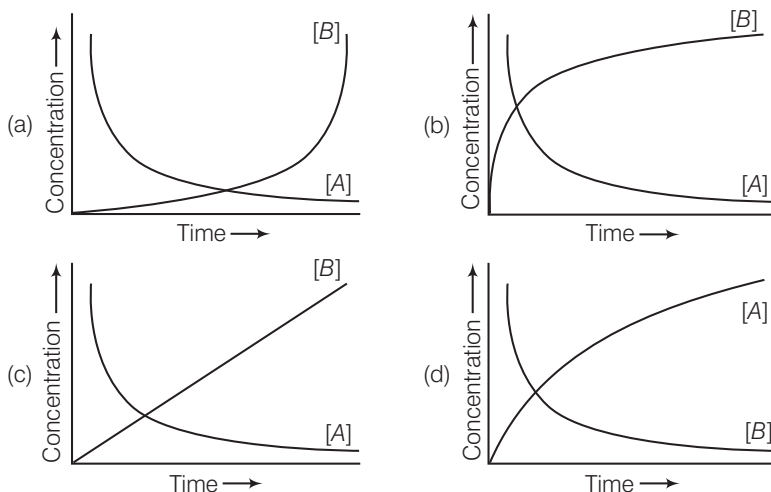
e.g., hydrolysis of ethyl acetate in presence of excess of water



Excess $[\text{H}_2\text{O}]$ can cause the independency of reaction on H_2O .

Hence, (a) is the correct choice.

Q. 20 Consider the reaction $\text{A} \longrightarrow \text{B}$. The concentration of both the reactants and the products varies exponentially with time. Which of the following figures correctly describes the change in concentration of reactants and products with time?



Ans. (b) $A \longrightarrow B$

Concentration of reactants and products varies exponentially *w.r.t* time.

- (i) Concentration of reactant (here, A) decreases exponentially *w.r.t* time.
- (ii) Concentration of product (here, B) increases exponentially *w.r.t* time new line correct graph representing the above reaction is (b).

Multiple Choice Questions (More Than One Options)

Q. 21 Rate law cannot be determined from balanced chemical equation if

- (a) reverse reaction is involved
- (b) it is an elementary reaction
- (c) it is a sequence of elementary reactions
- (d) any of the reactants is in excess

Ans. (a, c, d)

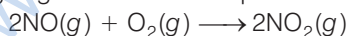
Rate law can be determined from balanced chemical equation if it is an elementary reaction.

Q. 22 Which of the following statements are applicable to a balanced chemical equation of an elementary reaction?

- (a) Order is same as molecularity
- (b) Order is less than the molecularity
- (c) Order is greater than the molecularity
- (d) Molecularity can never be zero

Ans. (a, d)

For a balanced chemical equation of an elementary reaction order is same as molecularity and molecularity can never be zero. If molecularity of a reaction is considered to be zero it mean that no reactant is going to transform into product. Consider a chemical reaction.



Differential rate law expression can be written as

$$\frac{dR}{dt} = k[\text{NO}]^2 [\text{O}_2]$$

Here, molecularity = 3, order = 3

Q. 23 In any unimolecular reaction

- (a) only one reacting species is involved in the rate determining step
- (b) the order and the molecularity of slowest step are equal to one
- (c) the molecularity of the reaction is one and order is zero
- (d) both molecularity and order of the reaction are one

Ans. (a, b)

Since, the reaction is an unimolecular reaction. Hence, in the slowest step *i.e.*, in the rate determining step the only one reacting species is involved. Therefore, order of reaction and molecularity of reaction is equal to one.

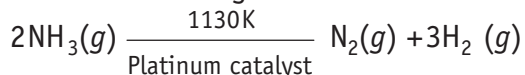
Q. 24 For a complex reaction

- (a) order of overall reaction is same as molecularity of the slowest step
- (b) order of overall reaction is less than the molecularity of the slowest step
- (c) order of overall reaction is greater than molecularity of the slowest step
- (d) molecularity of the slowest step is never zero or non-integer

Ans. (a, d)

- (a) For a complex reaction, order of overall reaction = molecularity of slowest step
As rate of overall reaction depends upon total number of molecules involved in slowest step of the reaction. Hence, molecularity of the slowest step is equal to order of overall reaction.
- (d) Since, the completion of any chemical reaction is not possible in the absence of reactants. Hence, slowest step of any chemical reaction must contain at least one reactant. Thus, molecularity of the slowest step is never zero or non-integer.

Q. 25 At high pressure the following reaction is zero order.



Which of the following options are correct for this reaction?

- (a) Rate of reaction = Rate constant
(b) Rate of the reaction depends on concentration of ammonia
(c) Rate of decomposition of ammonia will remain constant until ammonia disappears completely
(d) Further increase in pressure will change the rate of reaction

Ans. (a, c, d)

Given, chemical reaction is



At very high pressure reaction become independent of concentration of ammonia *i.e.*, zero order reaction

Hence,

$$\text{Rate} = k[\rho_{\text{NH}_3}]^0$$

$$\text{Rate} = k$$

- (a) Rate of reaction = Rate constant
(b) Rate of decomposition of ammonia will remain constant until ammonia disappears completely.
(c) Since, formation of ammonia is a reversible process further increase in pressure will change the rate of reaction. According to Le-Chatelier principle increase in pressure will favour in backward reaction.

Q. 26 During decomposition of an activated complex

- (a) energy is always released (b) energy is always absorbed
(c) energy does not change (d) reactants may be formed

Ans. (a, d)

When the reactant molecules collide each other they lead to formation of an activated complex. It has highest energy among reactants, products and activated complex. When it decomposes to give product, energy is released and stability of product increases.

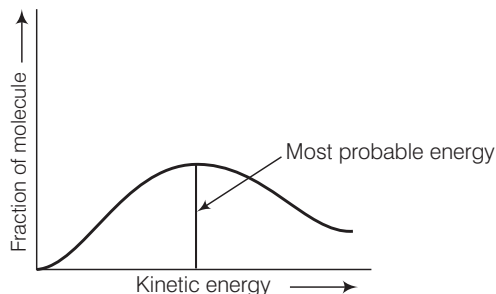
Since, the entire concentration of activated complex do not convert into products while, some activated complex may give reactants also.

Q. 27 According to Maxwell, Boltzmann distribution of energy..... .

- (a) the fraction of molecules with most probable kinetic energy decreases at higher temperatures
(b) the fraction of molecules with most probable kinetic energy increases at higher temperatures
(c) most probable kinetic energy increases at higher temperatures
(d) most probable kinetic energy decreases at higher temperatures

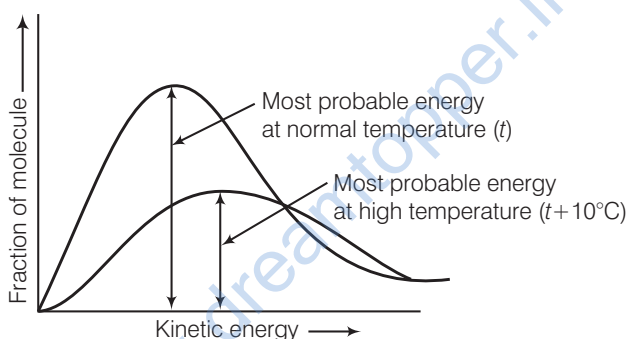
Ans. (a, c)

Distribution of kinetic energy may be described by plotting a graph of fraction of molecules versus kinetic energy.



Kinetic energy of maximum fraction of molecule is known as most probable kinetic energy. It is important to note that with increase of temperature, peak shifts forward but downward. This means that with increase of temperature,

- (i) most probable kinetic energy increases.
- (ii) the fractions of molecules possessing most probable kinetic energy decreases.

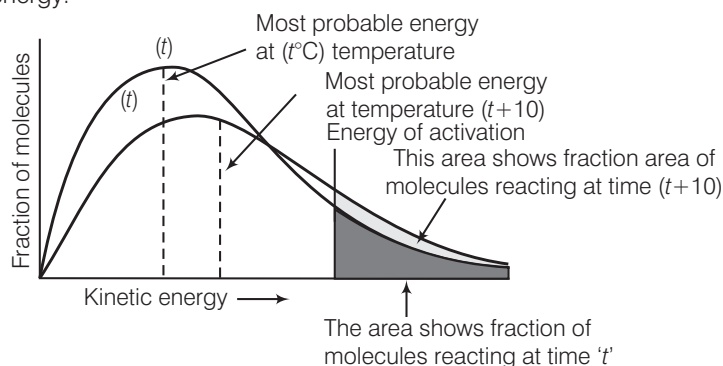


Q. 28 In the graph showing Maxwell, Boltzmann distribution of energy

- (a) area under the curve must not change with increase in temperature
- (b) area under the curve increases with increase in temperature
- (c) area under the curve decreases with increase in temperature
- (d) with increase in temperature curve broadens and shifts to the right hand side

Ans. (a, d)

According to Maxwell Boltzmann distribution curve, area under the curve must not change with increase in temperature. But with increase in temperature curve broadens and shift towards right hand side due to decrease in fraction of molecules having most probable kinetic energy.



Q. 29 Which of the following statements are in accordance with the Arrhenius equation?

- (a) Rate of a reaction increases with increase in temperature
- (b) Rate of a reaction increases with decrease in activation energy
- (c) Rate constant decreases exponentially with increase in temperature
- (d) Rate of reaction decreases with decrease in activation energy

Ans. (a, b)

Arrhenius equation can be written as $k = A.e^{\frac{-E_a}{RT}}$

$k \propto e^{-E_a}$ i.e., rate of reaction increases with decrease in activation energy.

$$k \propto e^{\frac{1}{T}}$$

$k \propto e^T$ i.e., rate of reaction increases with increase in temperature.

Q. 30 Mark the incorrect statements.

- (a) Catalyst provides an alternative pathway to reaction mechanism
- (b) Catalyst raises the activation energy
- (c) Catalyst lowers the activation energy
- (d) Catalyst alters enthalpy change of the reaction

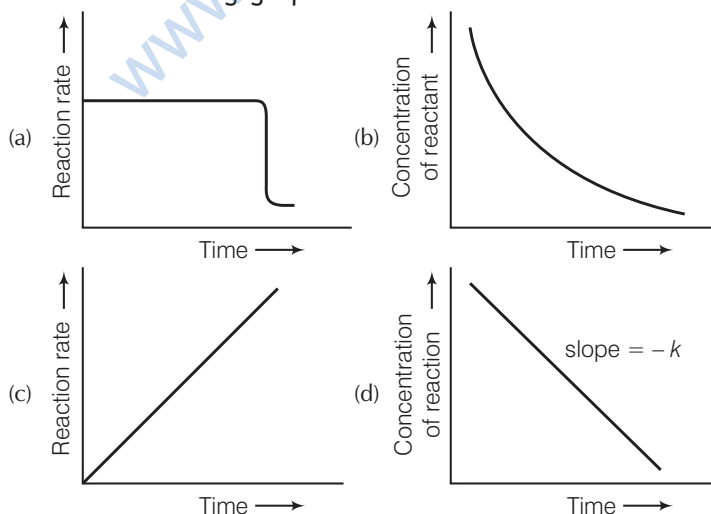
Ans. (b, d)

Function of Catalyst As the catalyst is added to the reaction medium rate of reaction increases by decreasing activation energy of molecule. Hence, it follows an alternative pathway.

Catalyst does not change the enthalpy change of reaction. Energy of reactant and product remain same in both catalysed and uncatalysed reaction.

Hence, (a) and (d) are incorrect statements.

Q. 31 Which of the following graphs is correct for a zero order reaction?



Thinking Process

This problem includes graphical representation of zero order reaction. To solve this problem.

- (i) Write rate equation of zero order reaction.
- (ii) Transform it into equation of straight line.
- (iii) Transform it into a curve representing rate versus time.

Ans. (a, d)

For a zero order reaction

$$[R] = (-k)t + [R]_0 \quad \dots(i)$$

$$y = m \times x + c$$

On comparing with Eq. of straight line

$$y = [R] \text{ concentration}$$

$$x = t \text{ time}$$

Slope (m) = $-k$ rate constant

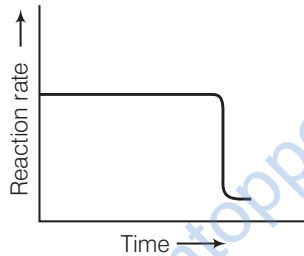
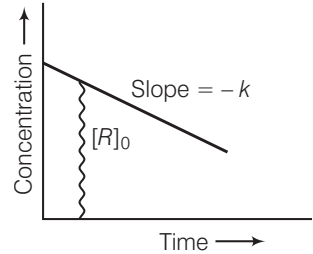
Intercept (c) = $[R]_0$ initial concentration

On rearranging Eq. (i)

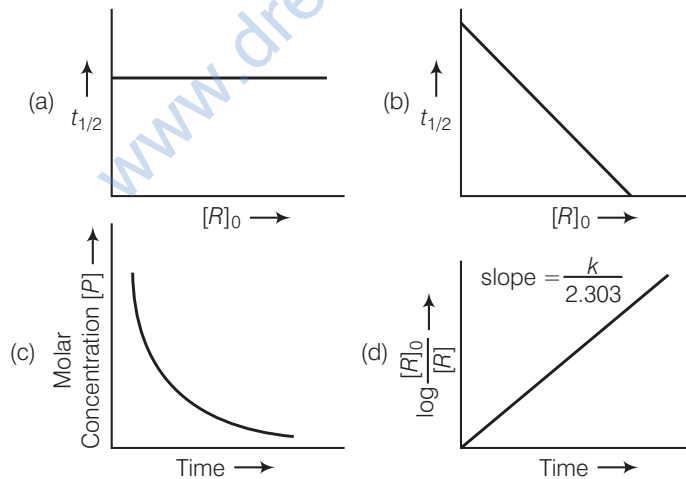
$$\frac{[R] - [R]_0}{t} = -k$$

$$\frac{[R] - [R]_0}{t} = -kt^0$$

$$\text{Rate} \propto t^0$$



Q. 32 Which of the following graphs is correct for a first order reaction?



Ans. (a, d)

For the first order reaction

$$k = \frac{2.303}{t} \log \frac{[R]_0}{[R]}$$

$$\frac{kt}{2.303} = \log \frac{[R]_0}{[R]}$$

$$\log \frac{[R]_0}{[R]} = \left(\frac{k}{2.303} \right) \times t + 0$$

$$\begin{array}{ccccccc} \uparrow & & \uparrow & & \uparrow & & \uparrow \\ y = & & m & & x & & + c \end{array}$$

Correct plot of $\log \frac{[R]_0}{[R]}$ can be represented by (d)

where, $\text{slope} = \frac{k}{2.303}$

The time taken for any fraction of the reaction to complete is independent of the initial concentration. Let, us consider it for half of the reaction to complete.

$$t = \frac{2.303}{k} \log \frac{a}{a-x}$$

For half-life

$$t = t_{1/2} \text{ and } x = \frac{a}{2}$$

$$t_{1/2} = \frac{2.303}{k} \log \frac{a}{a - \frac{a}{2}}$$

$$t_{1/2} = \frac{2.303}{k} \log 2$$

Half-life time

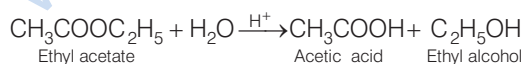
$$t_{1/2} = \frac{0.693}{k}$$

$t_{1/2}$ is independent of initial concentration. Hence, correct plot of $t_{1/2}$ and $[R]_0$ can be represented by a.

Short Answer Type Questions

Q. 33 State a condition under which a bimolecular reaction is kinetically first order reaction.

Ans. Presence of one of the reactants in excess, as in such a condition, its concentration remains constant and rate of such reaction depends upon concentration of one reactant only and reaction is known as pseudo first order reaction e.g., acid catalysed hydrolysis of ethyl acetate.



This reaction is bimolecular but is found to be of first order as experimentally it is observed that rate of reaction depends upon the concentration of ethyl acetate not on water as it is present in excess.

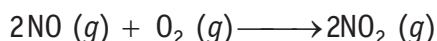
Q. 34 Write the rate equation for the reaction $2A + B \longrightarrow C$ if the order of the reaction is zero.

Ans. For reaction $2A + B \longrightarrow C$ if the rate of reaction is zero then it can be represented as

$$\text{Rate} = k [A]^0 [B]^0 = k$$

i.e., rate of reaction is independent of concentration of A and B.

Q. 35 How can you determine the rate law of the following reaction?



Ans. We can determine the rate of this reaction as a function of initial concentrations either by keeping the concentration of one of the reactants constant and changing the concentration of the other reactant or by changing the concentration of both the reactants. e.g., for the given reaction,

- (i) Keeping $[\text{O}_2]$ constant, if the concentration of NO is doubled, rate is found to become four times. This shows that,

$$\text{Rate} \propto [\text{NO}]^2$$

- (ii) Keeping [NO] constant, if the concentration of $[\text{O}_2]$ is doubled, rate is also found to become double. This shows that,

$$\text{Rate} \propto [\text{O}_2]^2$$

Hence, overall rate law will be

$$\begin{aligned} \text{Rate} &= k[\text{NO}]^2 [\text{O}_2] \\ \text{Rate law expression} \quad -\frac{1}{2} \frac{\Delta[\text{NO}]}{\Delta t} &= -\frac{\Delta[\text{O}_2]}{\Delta t} \\ &= \frac{1}{2} \frac{\Delta[\text{NO}_2]}{\Delta t} \end{aligned}$$

Q. 36 For which type of reactions, order and molecularity have the same value?

Ans. If the reaction is elementary reaction then order and molecularity have same value because elementary reaction proceeds in a single step.

Q. 37 In a reaction if the concentration of reactant A is tripled, the rate of reaction becomes twenty seven times. What is the order of the reaction?

Ans. Rate of any elementary reaction can be represented as

$$r = k[A]^n$$

After changing concentration to its triple value $A = 3A$, r becomes $27r$

$$27r = k[3A]^n$$

$$\frac{r}{27r} = \frac{k[A]^n}{k[3A]^n}$$

$$\frac{1}{27} = \left[\frac{1}{3}\right]^n \Rightarrow \left[\frac{1}{3}\right]^3 = \left[\frac{1}{3}\right]^n$$

Hence, $n = 3$

Order of reaction is three.

Q. 38 Derive an expression to calculate time required for completion of zero order reaction.

Ans. For zero order reaction $[R] = [R]_0 - kt$

For completion of the reaction $[R] = 0$

$$\therefore t = \frac{[R]_0}{k}$$

Q. 39 For a reaction $A + B \longrightarrow$ Products, the rate law is $\text{Rate} = k[A][B]^{3/2}$.
Can the reaction be an elementary reaction? Explain.

Ans. During an elementary reaction, the number of atoms or ions colliding to react is referred to as molecularity. Had this been an elementary reaction, the order of reaction with respect to B would have been 1, but in the given rate law it is $\frac{3}{2}$. This indicates that the reaction is not an elementary reaction. Hence, this reaction must be a complex reaction.

Q. 40 For a certain reaction large fraction of molecules has energy more than the threshold energy, yet the rate of reaction is very slow. Why?

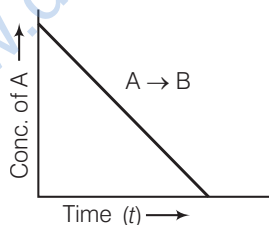
Ans. According to collision theory apart from the energy considerations, the colliding molecules should also have proper orientation for effective collision. This condition might not be getting fulfilled in the reaction as it shows the number of reactants taking part in a reaction, which can never be zero.

Q. 41 For a zero order reaction will the molecularity be equal to zero? Explain.

Ans. No, the molecularity can never be zero or a fractional number as it shows the number of reactants taking part in a reaction which can never be zero.

Q. 42 For a general reaction $A \rightarrow B$, plot of concentration of A vs time is given in figure. Answer the following questions on the basis of this graph.

- What is the order of the reaction?
- What is the slope of the curve?
- What are the units of rate constant?



Ans. (i) For $A \longrightarrow B$ the given graph shows a zero order reaction. Mathematically represented as

$$[R] = -kt + [R]_0$$

Which is equation of straight line. Hence, reaction is a zero order.

- Slope = $-k$
- Unit of zero order reaction is $\text{mole L}^{-1} \text{s}^{-1}$.

Q. 43 The reaction between $\text{H}_2(g)$ and $\text{O}_2(g)$ is highly feasible yet allowing the gases to stand at room temperature in the same vessel does not lead to the formation of water. Explain.

Ans. Because activation energy of the reaction is very high at room temperature but at high temperature $\text{H}-\text{H}$ and $\text{O}-\text{O}$ bond break and colliding particles cross the energy barrier. This is why reaction between $\text{H}_2(g)$ and $\text{O}_2(g)$ does not lead to formation of water at room temperature while keeping in the same vessel.

Q. 44 Why does the rate of a reaction increase with rise in temperature?

Ans. At higher temperatures, larger fraction of colliding particles can cross the energy barrier (*i.e.*, the activation energy) which leads to faster rate.

Q. 45 Oxygen is available in plenty in air yet fuels do not burn by themselves at room temperature. Explain.

Ans. For combustion reactions, activation energy of fuels is very high at room temperature. So, fuels do not burn by themselves at room temperature.

Q. 46 What is the probability of reaction with molecularity higher than three very rare?

Ans. According to collision theory, we know that to complete any chemical reaction there must be effective collision between reactant particles and they must have minimum sufficient energy. The probability of more than three molecules colliding simultaneously is very small. Hence, possibility of molecularity being three is very low.

Q. 47 Why does the rate of any reaction generally decreases during the course of the reaction?

Ans. The rate of a reaction depends on the concentration of the reactants. As the reaction proceeds in forward direction, concentration of reactant decreases and that of products increases. So, the rate of reaction generally decreases during the course of reaction.

Q. 48 Thermodynamic feasibility of the reaction alone cannot decide the rate of the reaction. Explain with the help of one example.

Ans. Thermodynamically the conversion of diamond to graphite is highly feasible but this reaction is very slow because its activation energy is high.
Hence, thermodynamic feasibility of the reaction alone cannot decide the rate of reaction.

Q. 49 Why in the redox titration of KMnO_4 vs oxalic acid, we heat oxalic acid solution before starting the titration?

Ans. As we know with increase in temperature rate of reaction increases, Hence, we heat oxalic acid solution before starting of titration to increase the rate of decolourisation.

Q. 50 Why can't molecularity of any reaction be equal to zero?

Ans. Molecularity of the reaction is the number of molecules taking part in an elementary step. For this we require at least a single molecule leading to the value of minimum molecularity of one. Hence, molecularity of any reaction can never be equal to zero.


Q. 51 Why molecularity is applicable only for elementary reactions and order is applicable for elementary as well as complex reactions?

Ans. A complex reaction occurs through a number of steps *i.e.*, elementary reactions. Number of molecules involved in each elementary reaction may be different, *i.e.*, the molecularity of each step may be different. Therefore, it is meaningless to talk of molecularity of the overall complex reaction.

On the other hand, order of complex reaction depends upon the molecularity of the slowest step. Hence, it is not meaningless to talk of the order of a complex reaction.

Q. 52 Why can we not determine the order of a reaction by taking into consideration the balanced chemical equation?

Ans. Balanced chemical equation often leads to incorrect order or rate law. e.g., the following reaction seems to be a tenth order reaction

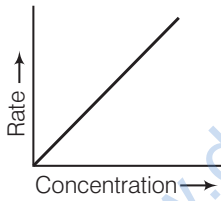
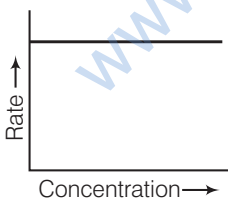
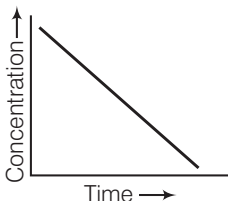
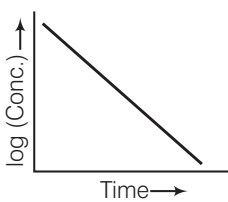


This is actually a second order reaction. Actually the reaction is complex and occurs in several steps. The order of such reaction is determined by the slowest step in the reaction mechanism.

Order is determined experimentally and is confined to the dependence of observed rate of reaction on the concentration of reactants.

Matching The Columns

Q. 53 Match the graph given in Column I with the order of reaction given in Column II. More than one item in Column I may link to the same item of Column II.

	Column I	Column II
A.		1. First order 2. Zero order
B.		
C.		
D.		

Ans. A. →(1) B. →(2) C. →(2) D. →(1)

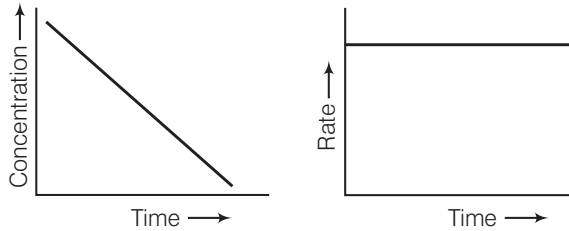
For zero order reaction rate equation may be written as

$$[R] = -kt + [R_0] \quad \dots(i)$$

Which denotes a straight line equation similar to $y = mx + c$

On transforming (i) $\frac{[R] - [R_0]}{t} = -k$

$$k = \frac{[R_0] - [R]}{t}$$



$$k = \text{Rate}$$

$$\text{Rate} = k \cdot [t]^0$$

$$\text{Rate} \propto [t]^0$$

For a first order reaction $\frac{dx}{dt} \propto [\text{concentration}]^1$

∴ Graph between rate and concentration may be drawn as

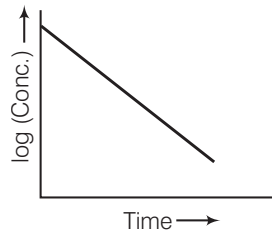
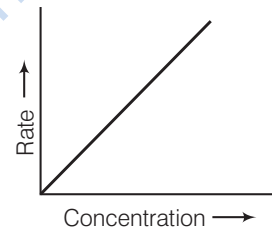
$$k = \frac{2.303}{t} \log \frac{[R]_0}{[R]}$$

$$\frac{kt}{2.303} = \log \left[\frac{[R]_0}{[R]} \right]$$

$$\frac{kt}{2.303} = \log[R]_0 - \log[R]$$

$$\log[R] = \left(\frac{-k}{2.303} \right) t + \log[R]_0$$

Slope Intercept



Q. 54 Match the statements given in Column I and Column II.

Column I		Column II	
A.	Catalyst alters the rate of reaction	1.	Cannot be fraction or zero
B.	Molecularity	2.	Proper orientation is not there
C.	Second half-life of first order reaction	3.	By lowering the activation energy
D.	$e^{-E_a/RT}$	4.	Is same as the first
E.	Energetically favourable reactions are sometimes slow	5.	Total probability is one
F.	Area under the Maxwell, Boltzmann curve is constant	6.	Refers to the fraction of molecules with energy equal to or greater than activation energy

Ans. A. → (3) B. → (1) C. → (4) D. → (6) E. → (2) F. → (5)

1. Catalyst alters the rate of reaction by lowering activation energy.
2. Molecularity can't be fraction or zero. If molecularity is zero, then reaction is not possible.
3. Second half-life of first order reaction is same as first because half-life time is temperature independent.
4. $e^{-E_a/RT}$ refers to the fraction of molecules with kinetic energy equal to or greater than activation energy.
5. Energetically favourable reactions are sometimes slow due to improper orientation of molecule cause some ineffective collision of molecules.
6. Area under the Maxwell, Boltzmann curve is constant because total probability of molecule taking part in a chemical reaction is equal to one.

Q. 55 Match the items of Column I and Column II.

Column I	Column II
A. Diamond	1. Short interval of time
B. Instantaneous rate	2. Ordinarily rate of conversion is imperceptible
C. Average rate	3. Long duration of time

Ans. A. → (2) B. → (1) C. → (3)

1. Diamond can't be converted into graphite under ordinary condition.
2. Instantaneous rate of reaction completes at very short span of time.
3. Average rate of reaction occurs to a long duration of time.

Q. 56 Match the items of Column I and Column II.

Column I	Column II
A. Mathematical expression for rate of reaction	1. Rate constant
B. Rate of reaction for zero order reaction is equal to	2. Rate law
C. Units of rate constant for zero order reaction is same as that of	3. Order of slowest step
D. Order of a complex reaction is determined by	4. Rate of reaction

Ans. A. → (2) B. → (1) C. → (4) D. → (3)

1. Mathematical expression for rate of reaction is known as rate law.
2. Rate of reaction for zero order reaction is equal to rate constant
$$r = k[A]^0$$
$$\therefore r = k$$
3. Unit of rate of reaction is same as that of rate of reaction.
4. Order of complex reaction is determined by rate of a reaction, which is slowest.

Assertion and Reason

In the following questions a statement of Assertion (A) followed by a statement of Reason (R) is given. Choose the correct answer out of the following choices.

- (a) Both assertion and reason are correct and the reason is correct explanation of assertion.
- (b) Both assertion and reason are correct, but reason does not explain assertion.
- (c) Assertion is correct, but reason is incorrect.
- (d) Both assertion and reason are incorrect.
- (e) Assertion is incorrect, but reason is correct.

Q. 57 Assertion (A) Order of the reaction can be zero or fractional.

Reason (R) We cannot determine order from balanced chemical equation.

Ans. (b) Both assertion and reason are correct, but the reason is not the correct explanation of assertion.

Order of reaction can be zero or fractional as order of reaction is directly related to sum of power of reactants. Reason is a correct statement but not correct explanation.

Q. 58 Assertion (A) Order and molecularity are same.

Reason (R) Order is determined experimentally and molecularity is the sum of the stoichiometric coefficient of rate determining elementary step.

Ans. (e) Assertion is incorrect and reason is correct.

Order and molecularity may or may not be same as order of reaction is sum of power of reactant which can be determined experimentally. But molecularity is sum of stoichiometric coefficient of rate determining elementary step.

Q. 59 Assertion (A) The enthalpy of reaction remains constant in the presence of a catalyst.

Reason (R) A catalyst participating in the reaction forms different activated complex and lowers down the activation energy but the difference in energy of reactant and product remains the same.

Ans. (a) Assertion and reason both are correct and reason is the correct explanation of assertion.

Enthalpy of reaction *i.e.*, difference of total enthalpy of reactants and product remains constant in the presence of a catalyst. As a catalyst participating in the reaction forms different activated complex and lowers down the activation energy but the difference in energy of reactant and product remains same.

Q. 60 Assertion (A) All collision of reactant molecules lead to product formation.

Reason (R) Only those collisions in which molecules have correct orientation and sufficient kinetic energy lead to compound formation.

Ans. (e) Assertion is incorrect, but reason is correct.

Correct assertion is "only effective collision lead to formation of product." Reason defines correct meaning of effective collision, and criterion of collision theory for completion of reaction.

Only those collisions in which molecules have correct orientation and sufficient energy lead to formation of product.

- Q. 61** Assertion (A) Rate constant determined from Arrhenius equation are fairly accurate for simple as well as complex molecules.
Reason (R) Reactant molecules undergo chemical change irrespective of their orientation during collision.

Ans. (c) Assertion is correct, but reason is incorrect.

Rate constant determined from Arrhenius equation are fairly accurate for simple and complex molecules because only those molecules which have proper orientation during collision (*i.e.*, effective collision) and sufficient kinetic energy lead the chemical change.

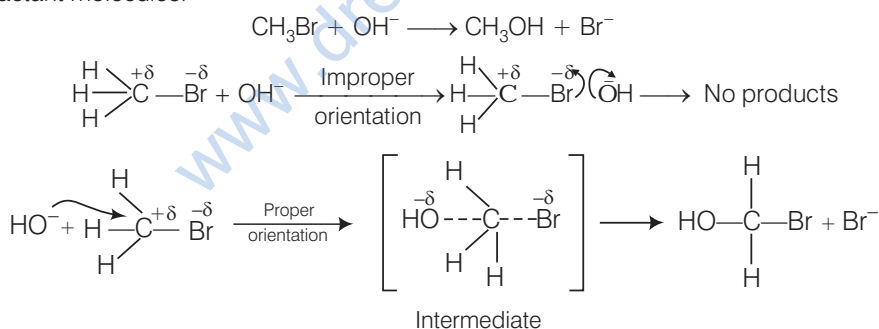
Long Answer Type Questions

- Q. 62** All energetically effective collisions do not result in a chemical change. Explain with the help of an example.

Ans. Only effective collision lead to the formation of products. It means that collisions in which molecules collide with sufficient kinetic energy (called threshold energy = activation energy + energy possessed by reacting species).

And proper orientation lead to a chemical change because it facilitates the breaking of old bonds between (reactant) molecules and formation of the new ones *i.e.*, in products.

e.g., formation of methanol from bromomethane depends upon the orientation of the reactant molecules.



The proper orientation of reactant molecules leads to bond formation whereas improper orientation makes them simply back and no products are formed.

To account for effective collisions, another factor P (probability or steric factor) is introduced
 $K = PZ_{AB}e^{-E_a/RT}$.

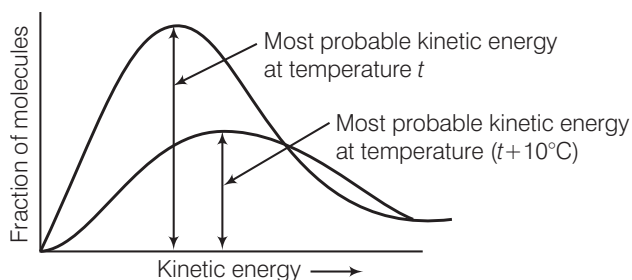
- Q. 63** What happens to most probable kinetic energy and the energy of activation with increase in temperature?

Ans. Kinetic energy is directly proportional to the absolute temperature and the number of molecules possessing higher energies increases with increase in temperature, *i.e.*, most probable kinetic energy increases with increase in temperature.

Energy of activation is related to temperature by the following Arrhenius equation

$$k = Ae^{-E_a/RT}$$

Thus, it also shows an increase with rise in temperature.



Q. 64 Describe how does the enthalpy of reaction remain unchanged when a catalyst is used in the reaction?

Ans. A catalyst is a substance which increases the speed of a reaction without itself undergoing any chemical change.

According to "intermediate complex formation theory" reactants first combine with the catalyst to form an intermediate complex which is short-lived and decomposes to form the products and regenerating the catalyst.

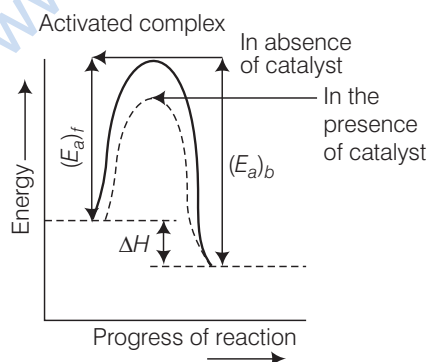
The intermediate formed has much lower potential energy than the intermediate complex formed between the reactants in the absence of the catalyst.

Thus, the presence of catalyst lowers the potential energy barrier and the reaction follows a new alternate pathway which require less activation energy.

We know that, lower the activation energy, faster is the reaction because more reactant molecules can cross the energy barrier and change into products.

Enthalpy, ΔH is a state function. Enthalpy of reaction, *i.e.*, difference in energy between reactants and product is constant, which is clear from potential energy diagram.

Potential energy diagram of catalysed reaction is given as



Q. 65 Explain the difference between instantaneous rate of a reaction and average rate of a reaction.

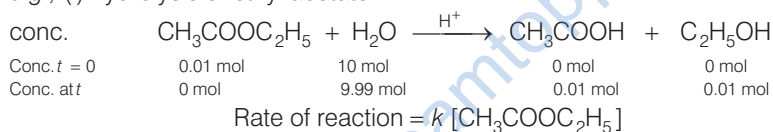
Ans. The difference between instantaneous rate of reaction and average rate of a reaction are as below

	Instantaneous rate of reaction	Average rate of reaction
(i)	It occurs within a short span of time.	It occurs during a long interval of time.
(ii)	It can't be calculated for multistep reaction.	It can be calculated for multistep reaction.
(iii)	It can be calculated for elementary reaction.	It can be calculated for elementary reaction.

Q. 66 With the help of an example explain what is meant by pseudo first order reaction.

Ans. A reaction in which one reactant is present in large amount and its concentration does not get altered during the course of the reaction, behaves as first order reaction. Such reaction is called pseudo first order reaction.

e.g., (i) hydrolysis of ethyl acetate



where, $k = k' [\text{H}_2\text{O}]$

e.g., (ii) inversion of cane sugar

